




Name: ()	Class:	Date:
Parent's Signature:	Results: /30	%

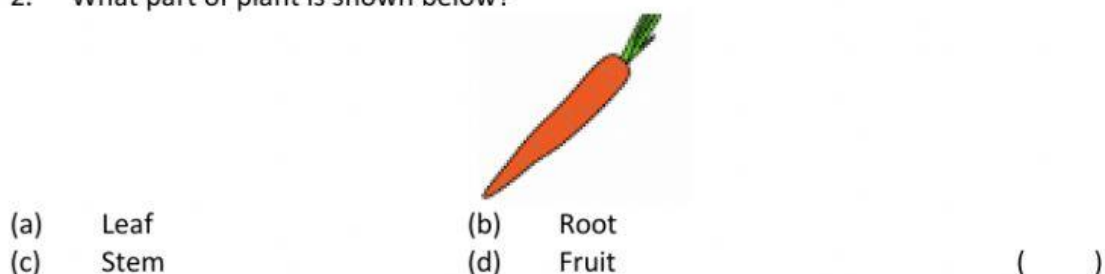
Section A. Multiple Choice Questions.

I. Choose the correct answer and write it in the brackets given below.

1. Which of the following is not a plant system ?



2. What part of plant is shown below?

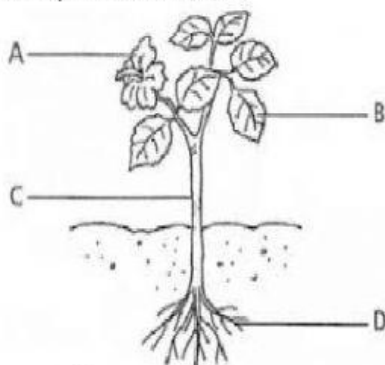


3. Which part of the plant absorbs water and minerals from the soil?





Study the plant below. Answer questions 5,6,7.



4. What are the names of the parts?

	A	B	C	D
(a)	Leaf	Stem	Root	Flower
(b)	Flower	Leaf	Stem	Root
(c)	Flower	Root	Stem	Leaf
(d)	Leaf	Stem	Flower	Root

()

5. What is the function of part B?

- (a) To absorb water
- (b) To make food for the plant
- (c) To carry food and water to other plant parts
- (d) To store excess food

()

6. Which **cannot** be a function of part C?

- (a) To support and hold the plant upright
- (b) To carry food and water to other plant parts
- (c) To store excess food
- (d) To take in oxygen for the plant

()







7. Why is this plant withered?



- | | |
|--------------------|-----------------------------|
| (a) Too much water | (b) Strong wind |
| (c) No sunlight | (d) Not enough water () |

8. Which plant stores food in its **roots**?

- | | |
|--|---|
| (a)  Sweet potato | (b)  Sugar cane |
| (c)  Lettuce | (d)  Cactus |
| | () |

9. Which part of the plant makes food for the plant?

- | | |
|--------------|--------------------|
| (a) Branches | (b) Fruits |
| (c) Leaves | (d) Flowers () |

10. Which part of the plant carries food and water to all parts of the plant?










- | | |
|------------|--------------------|
| (a) Stem | (b) Roots |
| (c) Leaves | (d) Flowers () |



Section B. Open-ended Questions

II. Fill in the blank with the part of plant that we eat.

roots - stem - leaves - flowers – fruits – seeds

 Sugar canes	 carrot
 Broccoli	 cabbage
 tomatoes	 Lotus seeds
 grapes	 cauliflowers
 lettuce	 Corn



II. The following shows a part of a plant.

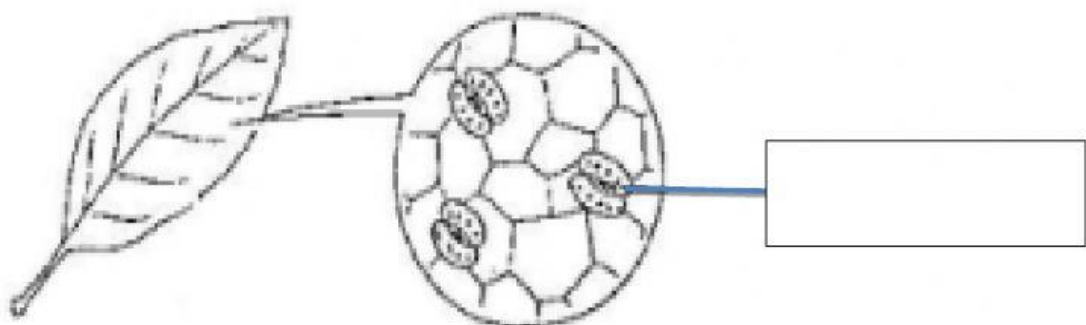


a. What is the part shown above?

b. Complete the table below.

Part	Name	Function
X		
Y		
Z		

c. Fill in the box the part that is shown below.



What are two functions of the part shown above.

i. _____

ii. _____