

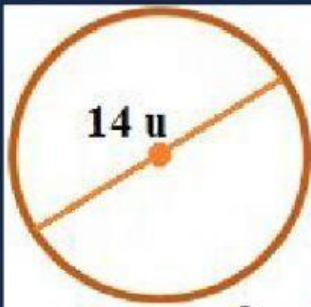
ÁREA DE UN CÍRCULO



NOMBRES:



Halla el área de los siguientes círculos:

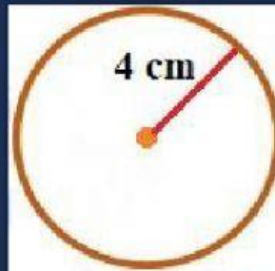


$$A_o = \pi R^2$$

$$A_o = \pi$$

$$A_o = \pi$$

$$A_o = \pi$$

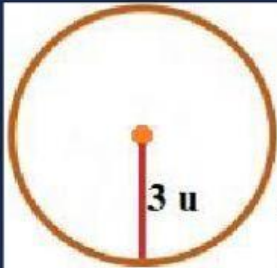


$$A_o = \pi R^2$$

$$A_o = \pi$$

$$A_o = \pi$$

$$A_o = \pi$$

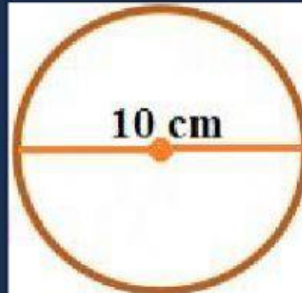


$$A_o = \pi R^2$$

$$A_o = \pi$$

$$A_o = \pi$$

$$A_o = \pi$$

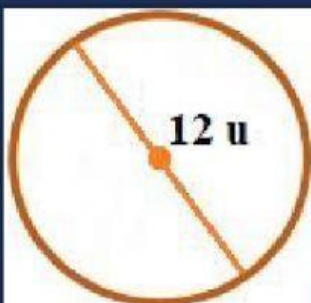


$$A_o = \pi R^2$$

$$A_o = \pi$$

$$A_o = \pi$$

$$A_o = \pi$$

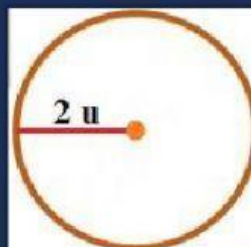


$$A_o = \pi R^2$$

$$A_o = \pi$$

$$A_o = \pi$$

$$A_o = \pi$$



$$A_o = \pi R^2$$

$$A_o = \pi$$

$$A_o = \pi$$

$$A_o = \pi$$