



Addition up to 20

Add the numbers, and write the answer in the box.


1.


$$\begin{array}{r} 12 \\ + 7 \\ \hline \square \end{array}$$


2.


$$\begin{array}{r} 10 \\ + 10 \\ \hline \square \end{array}$$


3.


$$\begin{array}{r} 1 \\ + 12 \\ \hline \square \end{array}$$


4.


$$\begin{array}{r} 13 \\ + 3 \\ \hline \square \end{array}$$


5.


$$\begin{array}{r} 14 \\ + 5 \\ \hline \square \end{array}$$


6.


$$\begin{array}{r} 7 \\ + 11 \\ \hline \square \end{array}$$


7.


$$\begin{array}{r} 8 \\ + 15 \\ \hline \square \end{array}$$

8.


$$\begin{array}{r} 16 \\ + 3 \\ \hline \square \end{array}$$

9.


$$\begin{array}{r} 7 \\ + 10 \\ \hline \square \end{array}$$