

Name \_\_\_\_\_ Date \_\_\_\_\_

### Perimeter of a Polygon

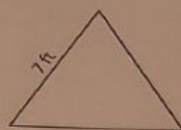
Find the perimeter of each regular polygon.

1)



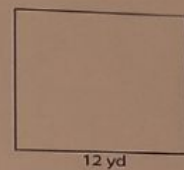
Perimeter = \_\_\_\_\_

2)



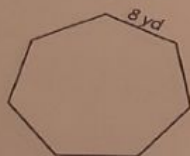
Perimeter = \_\_\_\_\_

3)



Perimeter = \_\_\_\_\_

4)



Perimeter = \_\_\_\_\_

5)



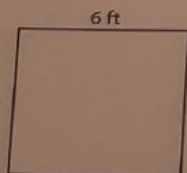
Perimeter = \_\_\_\_\_

6)



Perimeter = \_\_\_\_\_

7)



Perimeter = \_\_\_\_\_

8)



Perimeter = \_\_\_\_\_

9)



Perimeter = \_\_\_\_\_