



SARASAS SUKSAWAD SCHOOL






Prepared by Mr. Jediemark

Name: _____ Grade: _____ No.: _____

Mathematics Grade 4

Listening test:

container	capacity	area	length	graph
weight	distance	volume	something	information

-  1. _____ is a measurement of _____ how long something is.
-  2. _____ how heavy and light _____ is.
-  3. _____ is a diagram or chart comparing numbers and _____.
-  4. _____ is the amount required to fill an _____ or a space.
-  5. The _____ is how much something is contained in a _____.