



Time worksheet

Subject-Maths

9/17/2021


lollygirl

Name- _____


Grade- _____

Date- _____


A. What time is it?



____ : ____



____ : ____



____ : ____

B. Match the time. The first one is done for you.

Quarter past 5	5:15
3 o'clock	4:45
Quarter to 5	3:00
8 o'clock	10:30
Half past 10	8:00

C. Read the calendar and answer the following questions.

MARCH						
Sun	Mon	Tues	Wed	Thurs	Fri	Sat
1	2	3	4	5	6	7
8	9	10	11	12	13	14
15	16	17	18	19	20	21
22	23	24	25	26	27	28
29	30	31				

The bill is due on the first Friday of March. What is the due date of the bill?

Emma forgot to pay the bill on time. She paid the bill when it was three days overdue. When did she pay the bill?

What is the date of the last Monday of March?

Which day of the week is March 29th?

Which day of the week is March 14th?

How many Wednesdays are there in March?

How many days are there in March?

4. Click the correct time.



It's Ten to Ten

It's Ten past Ten

It's half past Ten

It's ten o' clock



It's half past three

It's half past twelve

It's twelve o' clock

It's three o' clock

5. Drag and Drop the Right Answers respectively



Quarter to Two

Half past Eleven

