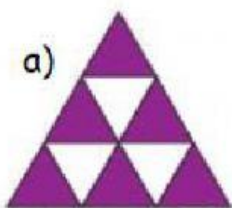
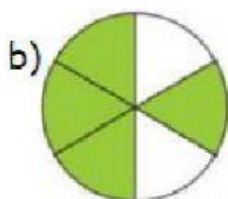
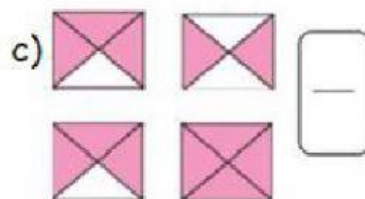


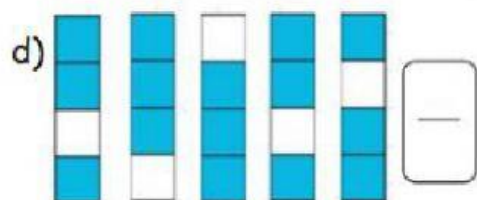
## Repaso de las fracciones

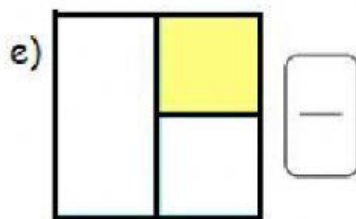
1. Escribe la fracción que representa la parte coloreada:

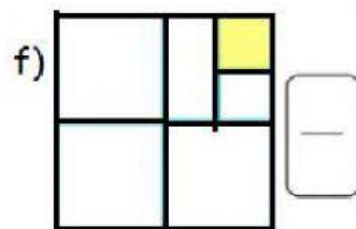








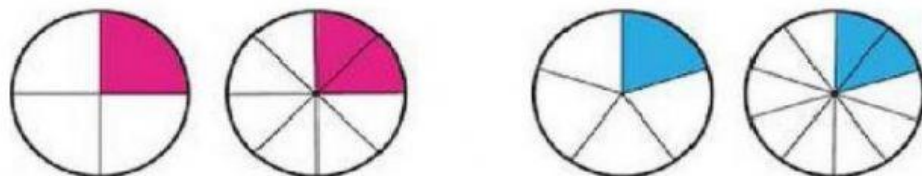





2. Observa con atención las fracciones equivalentes y complétalas:



$$\frac{1}{2} = \frac{2}{4} = \frac{3}{\square} = \frac{\square}{\square} = \frac{\square}{\square}$$

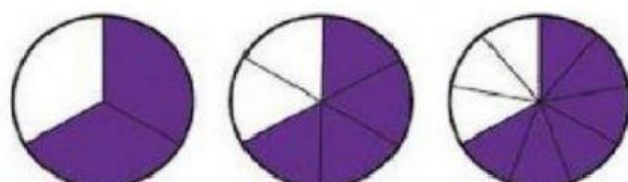


$$\frac{\square}{\square} = \frac{\square}{\square}$$

$$\frac{\square}{\square} = \frac{\square}{\square}$$



$$\frac{\square}{\square} = \frac{\square}{\square} = \frac{\square}{\square}$$



$$\frac{\square}{\square} = \frac{\square}{\square} = \frac{\square}{\square}$$