




Year 4 Mathematics-Term 1 Week 5 Lesson 1


LO: To recall multiplication and division facts.


EXAMPLE

 $4 \times 6 = 24$



 $6 \times 4 = 24$

1 Write the multiplication for each array, then write the answer.

a  $\square \times \square = \square$

b  $\square \times \square = \square$

c  $\square \times \square = \square$

d  $\square \times \square = \square$

Challenge 2: Complete these calculations

- a. _____ $\times 9 = 54$
- b. $5 \times 6 =$ _____
- c. $3 \times 9 =$ _____
- d. _____ $\div 6 = 6$
- e. How many 9s are there in 72? _____
- f. What do you multiply 6 by to get 24? _____

g. What is 9 doubled? _____

h. What is 42 split into 6? _____

Challenge 3:

Tick each multiply of 2

13

20

18

9

12

8

6

Tick each multiply of 5

35

22

50

45

55

35

46

Challenge 4:

1 Write each multiple into the correct space on the Venn diagram.
42 27 18 30 54 81 48 36 63

