

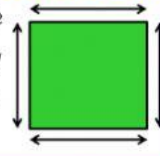
Name \_\_\_\_\_

## Mathematics

Calculate the perimeter for each figure.

### What is Perimeter?

The perimeter is the distance all the way around the outside of a 2D shape.



1.

14 cm

14 cm




14 cm

14 cm

Answer:  $p =$  \_\_\_\_\_ cm

2.

18 m



18 m


12 m

Answer:  $p =$  \_\_\_\_\_ m

3.

13 feet

19 feet

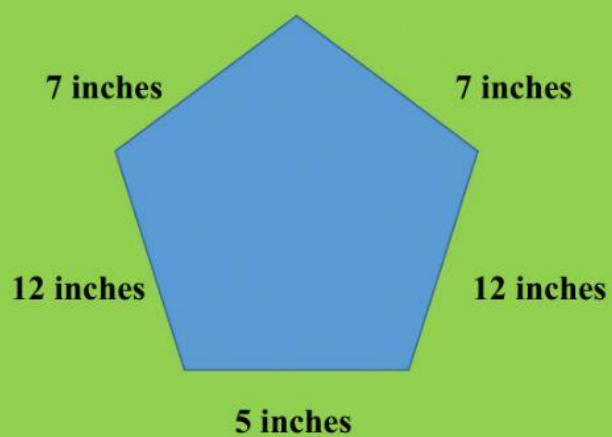


19 feet

21 feet

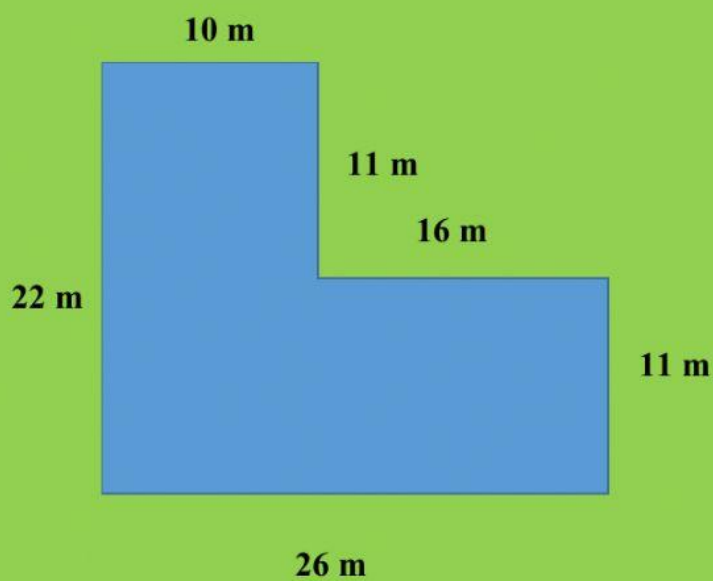
Answer:  $p =$  \_\_\_\_\_ feet

4.



Answer:  $p =$  \_\_\_\_\_ inches

5.



Answer:  $p =$  \_\_\_\_\_ m