

1. Complete the table below: [3pts]

67		24		43		60	
60	7						

2. Write the missing numbers: [2pts - 1pt for each line]

21	22			25			28	29	
	32		34				38		

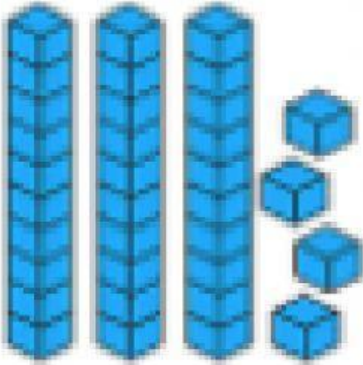

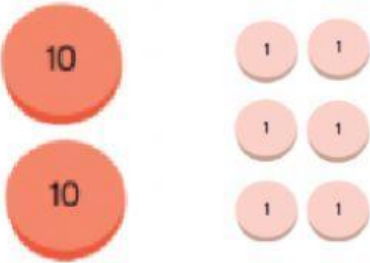
3. Write the missing numbers in these steps of 10: [3pts - 1pt for each line]

4
24

26
46

31
41

4. Write the 2-digit number: [3pts]

5. If we count from 0 to 20 in twos, what numbers would we not say (circle the numbers) [4pts]

2	6	9	4	12	4	13	16	17	19	20
---	---	---	---	----	---	----	----	----	----	----

6. Circle the correct child 2pts]

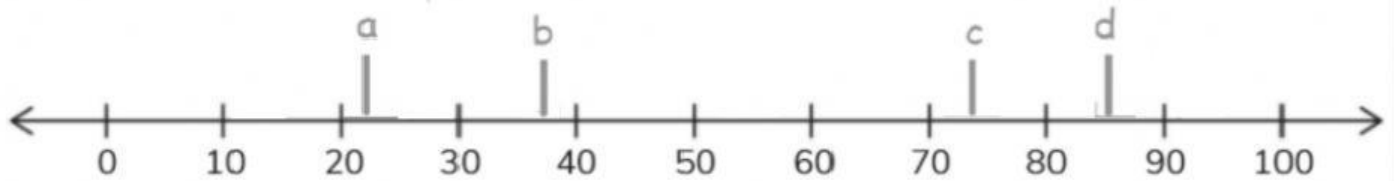
Circle the 2nd child



Circle the 7th child



7. Estimate the numbers marked on the number line [4pts]



8. Put the numbers in order from smallest to greatest [4pts]

37	93	25	27