

NAME: _____


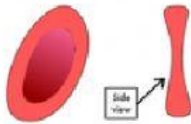


DATE: _____

BLOOD

1. The liquid part of blood is called _____.
2. The solid parts of blood are: _____ and _____.
3. Write RED BLOOD CELL or WHITE BLOOD CELL in response to each statement below.
 - a. _____ fight any infection that might enter the body.
 - b. _____ contain a pigment called hemoglobin.
 - c. _____ transport oxygen around the body.
 - d. _____ may be phagocytes or lymphocytes
 - e. _____ some engulf germs and destroys them
 - f. _____ looks like a donut from above and the number 8 from the side
 - g. _____ some release antibodies to fight germs.

2. Look at the blood components below. Drag the name and function to the correct cell.

RED BLOOD CELL	ENGULF AND KILL GERMS	PLATELETS	MAKE AND SEND ANTIBODIES
HELP BLOOD CLOT	LYMPHOCYTES	PHAGOCYTE	TRANSPORT OXYGEN

				
NAME OF COMPONENT				
FUNCTION OF COMPONENT				