

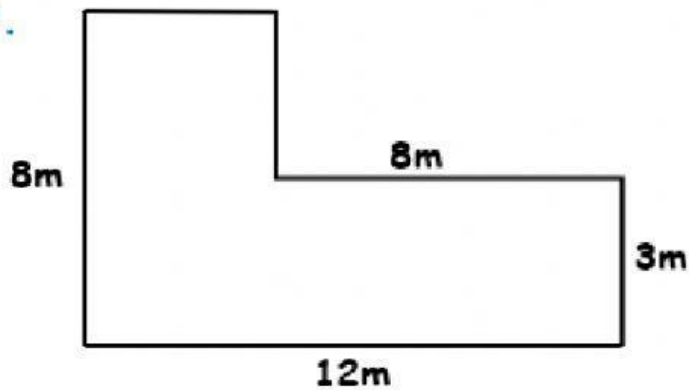


STEPS TO SUCCESS:

1. Identify the figure:
 - ♥ Check the length of the sides.
 - ♥ Put ? on the missing sides.
2. Separate the figure into 2 or 3 shapes.
3. Redraw the shapes & sides.
4. Label the shapes (Shape A or Shape B).
5. Write the formula for all the shapes & Solve.
6. Write the units for the answer & check.

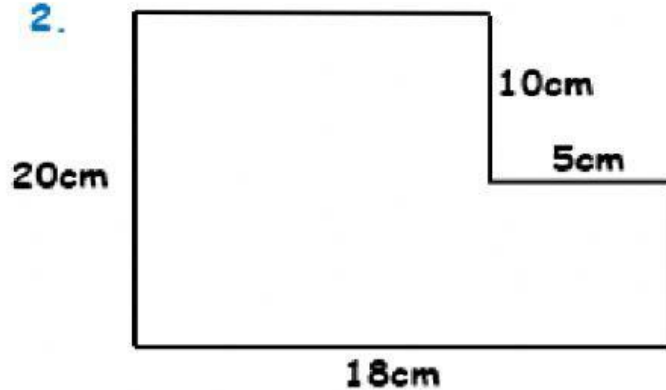
Find the area.

1.



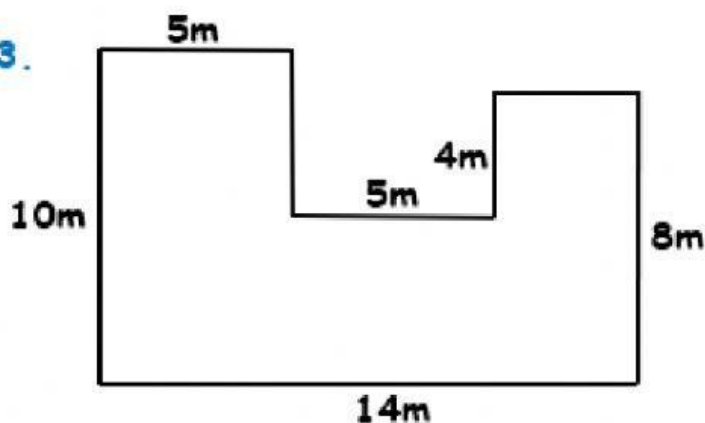
Area = _____

2.



Area = _____

3.



Area = _____