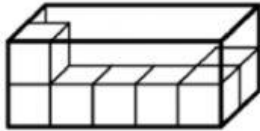


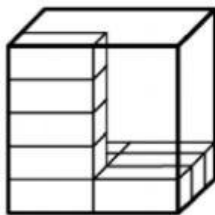
Grade 5Elite-Lesson 2.2: Use unit cubes to determine volume

How many cubes will fill the box without gaps or overlaps?



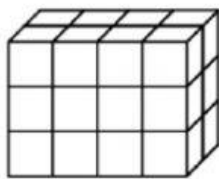
- ☐ A) 20 cubes
- ☐ B) 14 cubes
- ☐ C) 10 cubes
- ☐ D) 7 cubes

How many blocks will be needed to fill the box without gaps or overlaps?



blocks

Nathan made a rectangular prism with unit cubes. What is the volume of the prism?



Volume = cubic units