


Recognize and identify the names and properties of common 2D shapes.


Square	Circle	Rectangle	Triangle
--------	--------	-----------	----------



This 2D shape is a \_\_\_\_\_.

It has \_\_\_\_\_ corners.


It has \_\_\_\_\_ sides.



This 2D shape is a \_\_\_\_\_.

It has \_\_\_\_\_ corners.

It has \_\_\_\_\_ sides.



This 2D shape is a \_\_\_\_\_.

It has \_\_\_\_\_ corners.

It has \_\_\_\_\_ sides.



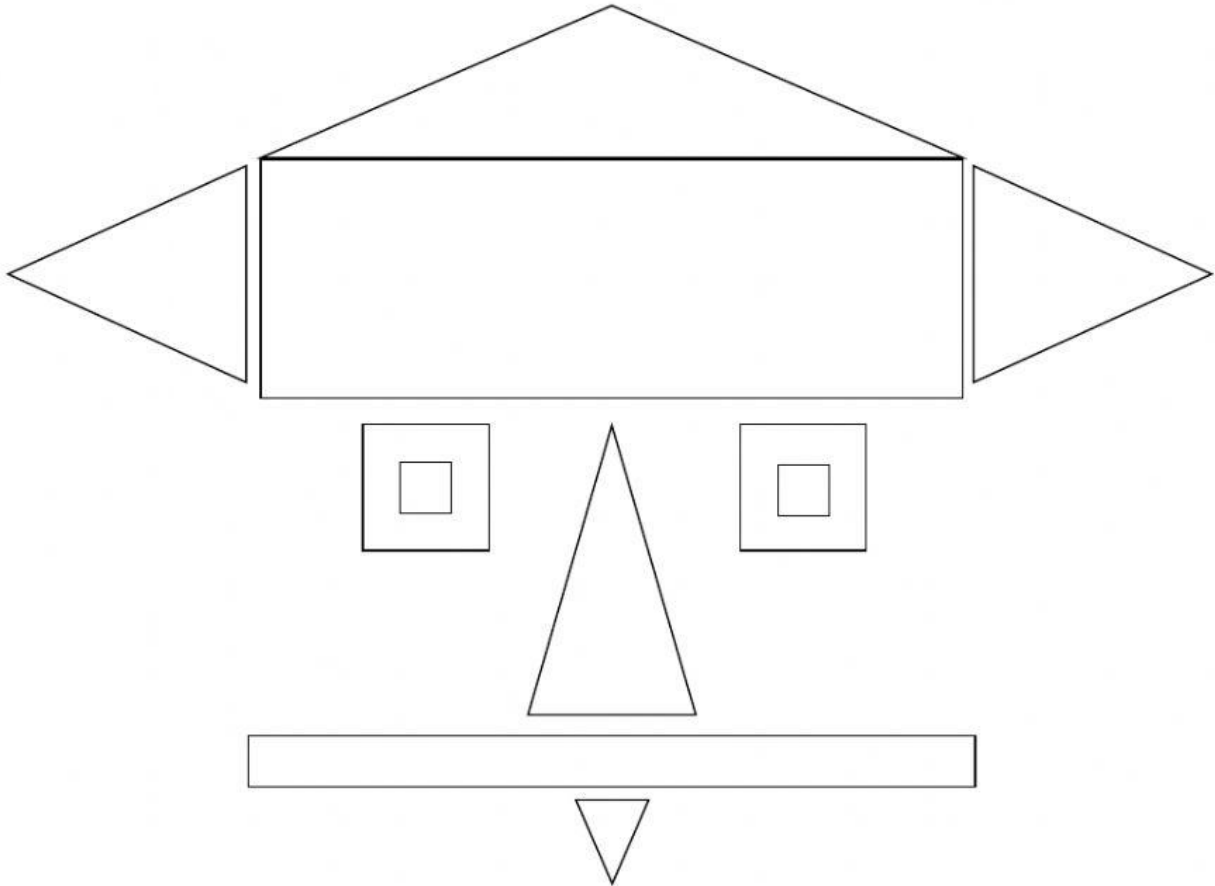
This 2D shape is a \_\_\_\_\_.

It has \_\_\_\_\_ corners.

It has \_\_\_\_\_ sides.

**Count the shapes**

Look at the pictures and count the shapes.



1. There are                      squares.
2. There are                      rectangles.
3. There are                      triangles.
4. There are                      circles.