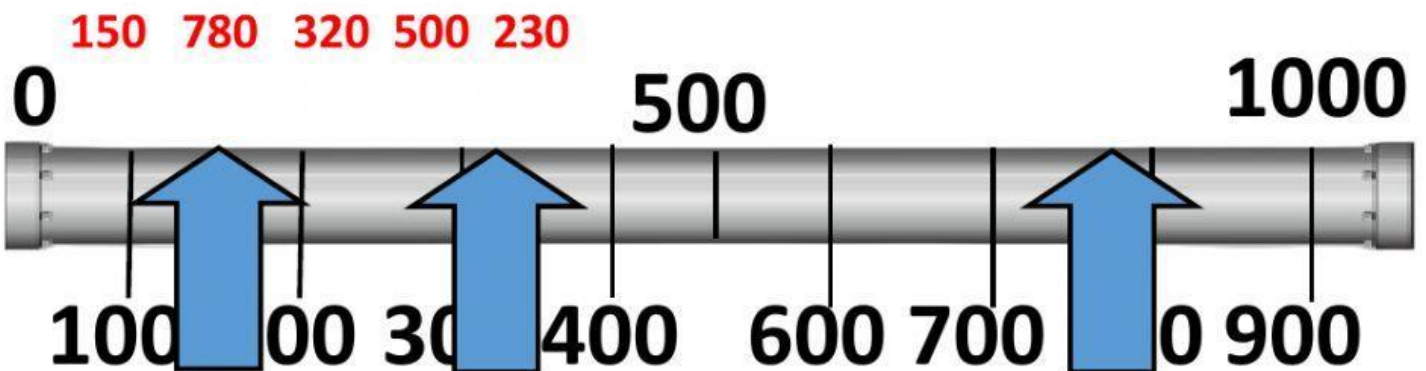
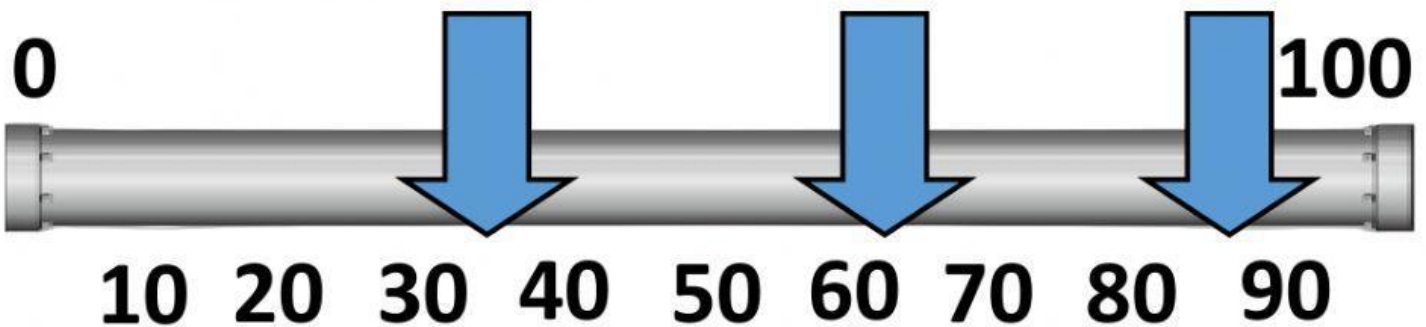







ESTIMATING/NUMBER LINES

10	20	30	40	50	60	70	80	90	100
		130					180		

Estimate which numbers are marked on the line. Choose from these numbers: **35 38 62 65 89 81**



Estimate the number. Choose a number: **50 100 20**

Estimate =	Estimate =	Estimate =
		



ESTIMATING/RANGE

361	371	381	391	401	411	421	431	441	451
		481			511				

Look at how much these minions weigh..

Number of minions	Weight
100	10g
200	20g
300	30g
400	40g
500	50g

Gru estimated that he had 400 to 500 minions. They weighed 56g. Is this a good estimate? _____ (yes/no)

Professor Flux estimated that he had 200 to 300 minions. They weighed 24g. Is this a good estimate? _____ (yes/no)

Dr. Nefario's minions weighed 15g. What is a good range? _____ to _____ minions.

400 to 500? 200 to 300? Or 100 to 200?