


# Making Pictograms

- 1 Uncle Juno has a farm.  
Uncle Juno counts each type of animal on the farm.

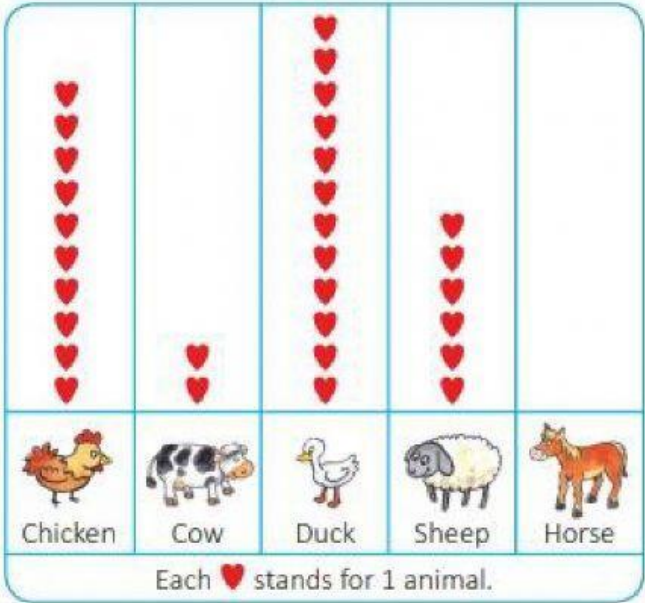


Then, he records the number of each type of animal in a chart.


Type of animal	Chicken	Cow	Duck	Sheep	Horse
Number	10	2	12	6	4

Uncle Juno draws a pictogram to show the number of each type of animal.

Animals on Uncle Juno's Farm



Use the pictogram to answer these questions.

- a Uncle Juno has  types of animals on his farm.
- b He has to draw   to show the number of horses.
- c He has  animals altogether.