

FRACTION MODELS TO PERCENTAGE

Learning objective:


- I am able to read fractions models and write in percentages.

Step to success:


- Count the number of shaded or unshaded
- Change to percentage.

Write the percentages of the shaded parts of the blocks below.


1




= _____ %




2





= _____ %




3



= _____ %



4



= _____ %

