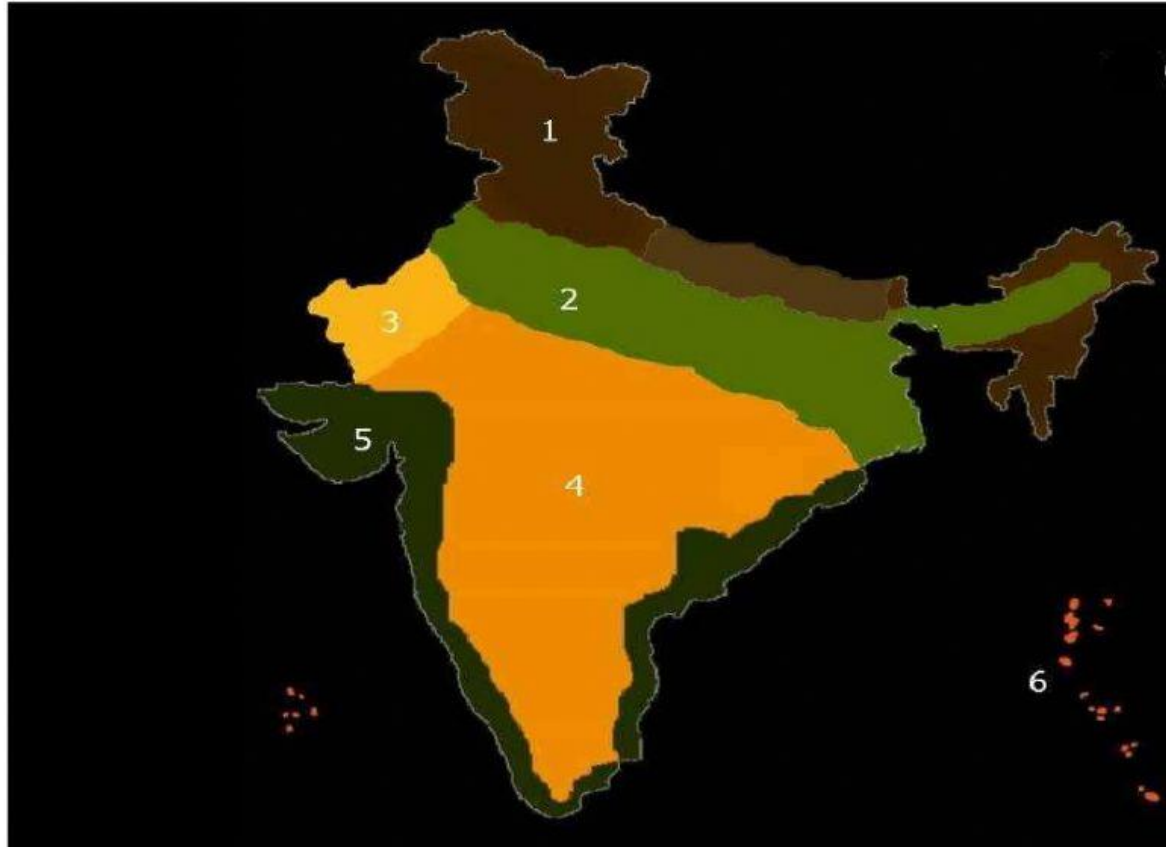




ARAVALI INTERNATIONAL SCHOOL
CLASS IV
SUBJECT: SOCIAL STUDIES
REVISION WORKSHEET 1
CHAPTER-3

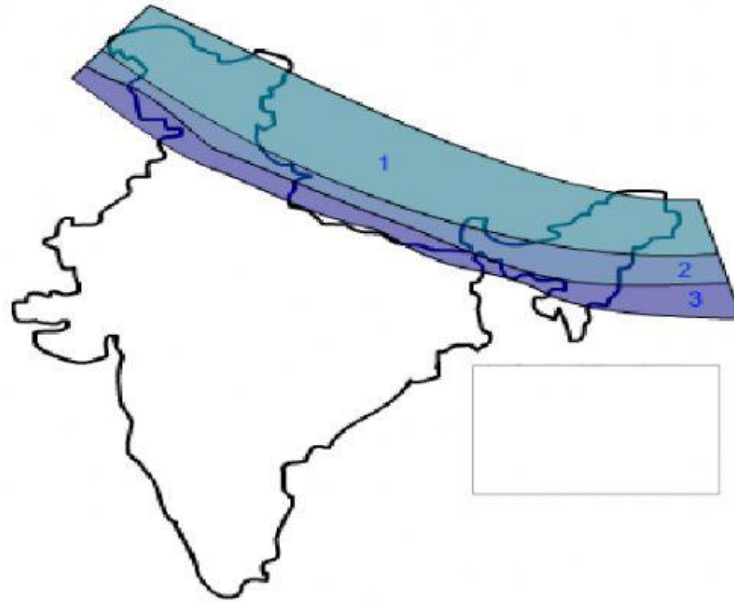
1. Observe the picture and write the name of the landforms:



1. _____
2. _____
3. _____

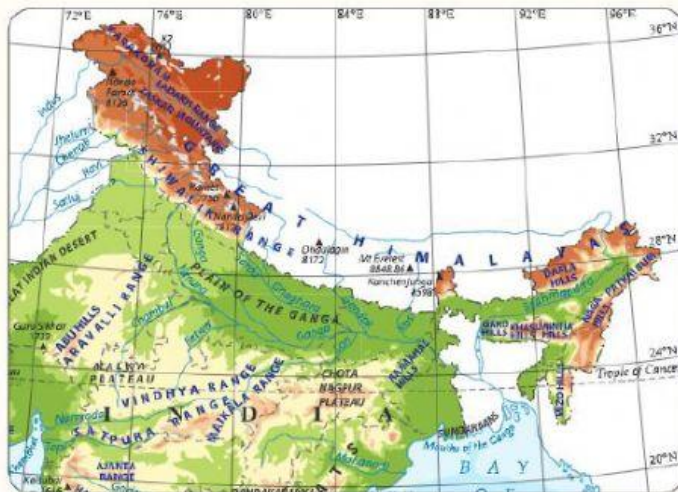
4. _____
5. _____
6. _____

2. Mark the three ranges of Himalayas.



1. _____ or _____ Range is the northernmost range of Himalayas
2. Middle Himalayas or _____ Range
3. _____ or Shiwalik Range

3. Read the paragraph and answer the questions.



Location of the Northern Mountains and the Northern Plains

mountain pass. Some important Himalayan passes are Zoji La, Jelep La, Shipki La, and Nathu La.

The Greater Himalayas

The Greater Himalayas are the northernmost and the highest of all the Himalayan ranges. The average height of this range is about 6,000 m. The world's highest peak, **Mt Everest** lies here. Kanchenjunga, Nanga Parbat, and Nanda Devi are some of the highest peaks of this range. The range also has many mountain passes. A route through a mountain is called a

- a) Which Himalayan range is the northernmost range?
- b) What is the other name of this range?
- c) Which is the highest mountain in this range?
- d) What is the height of this range?
- e) Zoji La and Shipki La are some important Himalayan passes. What do you mean by the word 'pass'?