




**A** Match the number of minutes of the shaded region on the clock face. **TP1**




30 minutes




15 minutes



10 minutes



45 minutes



35 minutes

**B** Match ✓ the correct time. **TP1**

1



Half past eight

Six minutes past eight

2



Five fifty

Four fifty

3



Eleven thirty

Quarter past eleven

4



Six fifty

Five minutes past six

5



Four o'clock

Four zero minute







6



Two twenty-five

Two fifteen

**C** Write the following times in numerals and words. **TP2**

<div data-bbox="268 360 288 389">1</div> 	<div data-bbox="608 360 740 389">Numeral:</div> <div data-bbox="608 490 695 519">Word:</div>
<div data-bbox="268 618 288 647">2</div> 	<div data-bbox="608 618 740 647">Numeral:</div> <div data-bbox="608 748 695 777">Word:</div>
<div data-bbox="268 875 288 904">3</div> 	<div data-bbox="608 875 740 904">Numeral:</div> <div data-bbox="608 1005 695 1034">Word:</div>
<div data-bbox="268 1133 288 1162">4</div> 	<div data-bbox="608 1133 740 1162">Numeral:</div> <div data-bbox="608 1263 695 1292">Word:</div>
<div data-bbox="268 1391 288 1420">5</div> 	<div data-bbox="608 1391 740 1420">Numeral:</div> <div data-bbox="608 1520 695 1550">Word:</div>
<div data-bbox="268 1648 288 1677">6</div> 	<div data-bbox="608 1648 740 1677">Numeral:</div> <div data-bbox="608 1778 695 1807">Word:</div>

**D** Record the activities in the table. **TP3**

**Wee Ling's Activities on Saturday**

Dinner at 7 : 30 p.m.

Lunch at 12 : 45 p.m.

Play at 5 : 00 p.m.

Sleep at 10 : 00 p.m.

Do revision at  
10 : 30 a.m. and  
8 : 30 p.m.

Breakfast at 8 : 00 a.m.

Help mom cleaning  
house at 4 : 00 p.m.

Time	Activities
8 : 00 a.m.	
	Do revision
12 : 45 p.m.	
	Help mom cleaning house
	Play
7 : 30 p.m.	
8 : 30 p.m.	
	Sleep