


ABC SCHOOL

Name	
Class	
Roll No.	

Q. Join the following :



MAT

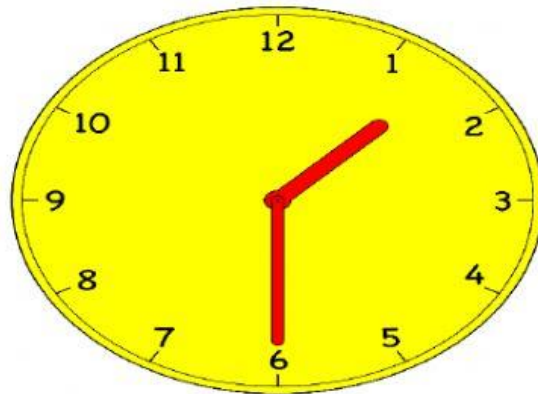


CAT



RAT

Q. What time does given clock show?



a) 1 O'clock

c) 6 O'clock

b) Half past one

d) Half past Six

Q Tick the Correct Option

PRESENT SIMPLE

Choose the correct option:

1. I **play** / **plays** football every Saturday.
2. He **play** / **plays** football on Sundays.
3. We **don't** / **doesn't** **like** / **likes** milk.
4. **Do** / **Does** you **like** / **likes** riding a bike?

Q. Solve the given problem

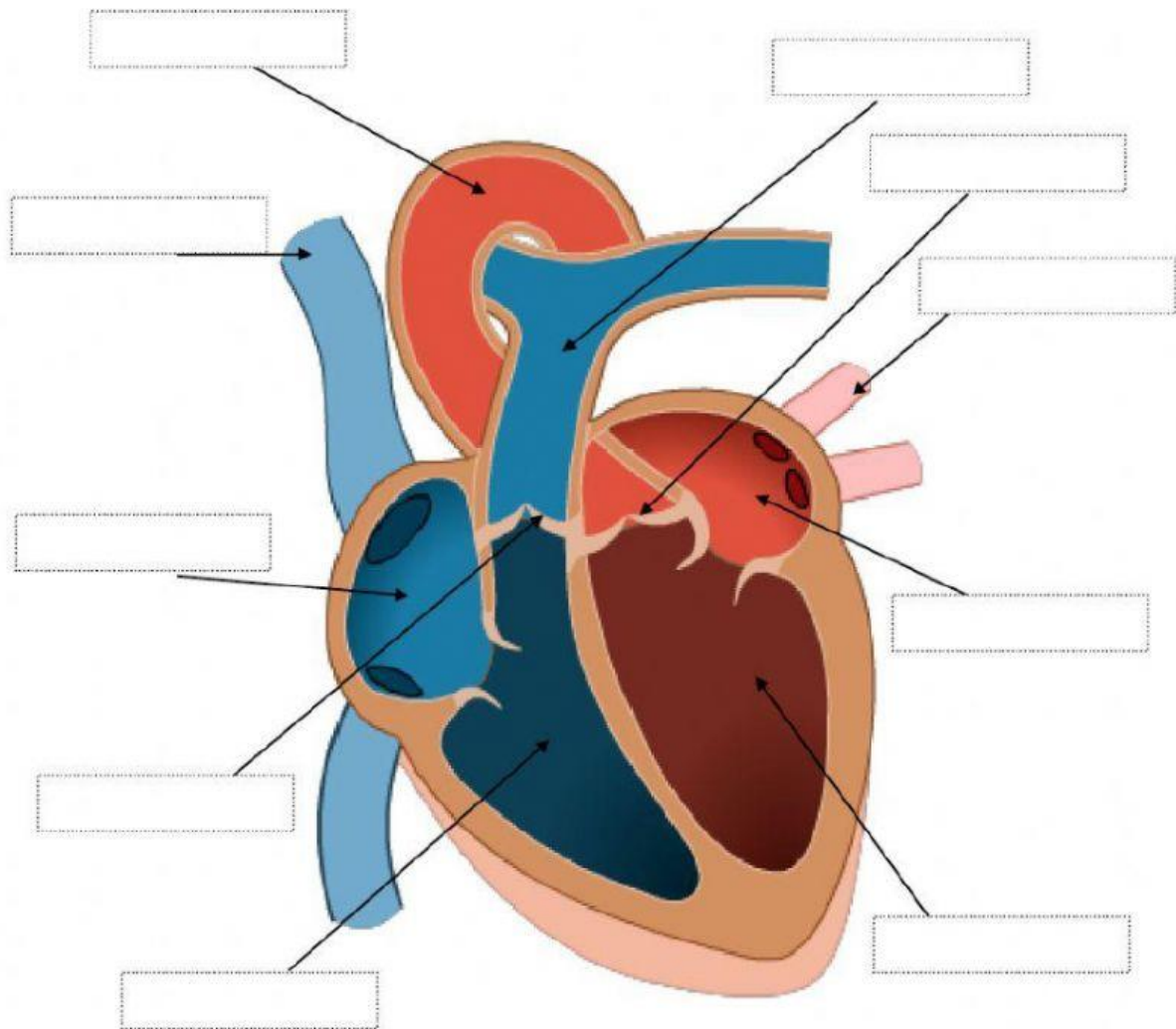
144

X5

.....

Label the heart...

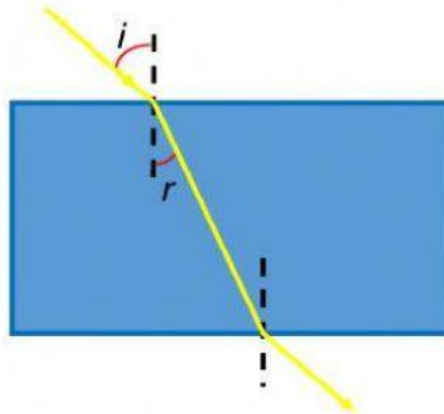
Drag and drop the names of the parts to the correct location



- | | | | |
|------------------|------------------|------------------|----------------|
| pulmonary artery | pulmonary vein | aorta | left ventricle |
| right ventricle | left atrium | right atrium | vena cava |
| | semi-lunar valve | semi-lunar valve | |

Light and Optics

Refraction of light



1. When the light travels from less dense medium (air) to denser medium (glass), it bends _____ normal.
2. i is the _____ while r is the _____.
3. As the light propagate into denser medium, the value of r is _____ than the value of i . The speed of light is _____ when it enter the denser medium.
4. The speed of light is _____ as it travel out from the glass.
5. When the light travels from _____ medium (glass) to _____ medium (air), it bends _____ normal.
6. The bending of light is known as _____.