

Name:

REVISION

1) Rabiya uses 3 packets of flour to make 15 cupcakes. How many cupcakes can she make with 12 packets of flour?

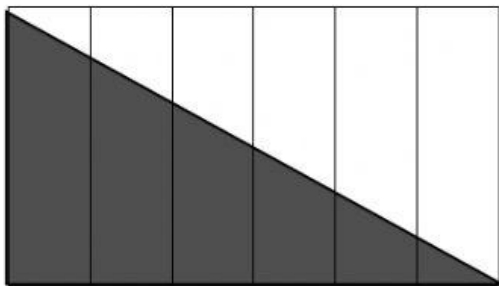
Cupcakes

2) Find the value of $46 - 56 \div 8 + 12 =$

3) 4kg of sugar cost \$9.40. Find the cost of 2kg of sugar?

\$

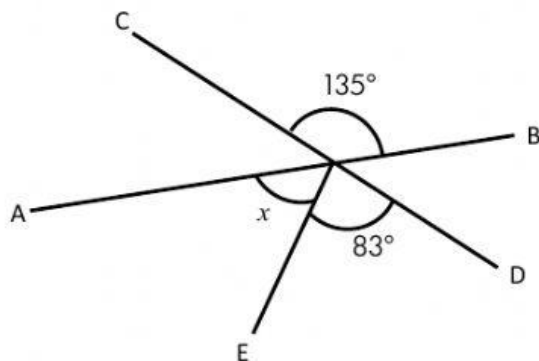
4) What percentage of the rectangle is shaded?



%

5) In this figure, find the value of $\angle x$. AB and CD are straight lines.

°



6) Express 203% as a decimal.

7) What is the missing number?

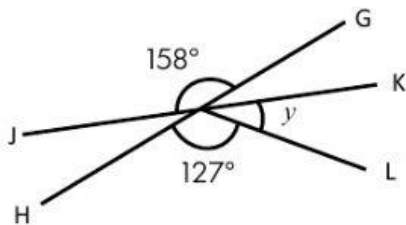
1, 4, 9, _____, 25.

8) $30\,000 \times 30 =$

9) Ammar has 180 storybooks. He has 3 times as many storybooks as Afif. How many storybooks they have altogether?

storybooks

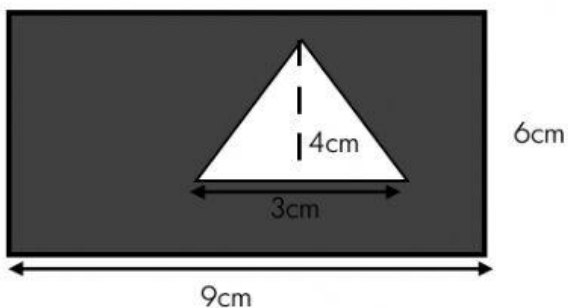
10) In this figure, find $\angle y$. GH and JK are straight lines.



11) $24.65 \times \text{_____} = 2465$

12) $40\,502 = 40\,000 + \text{_____} + 2$

13) Find the area of shaded part.



cm^2