

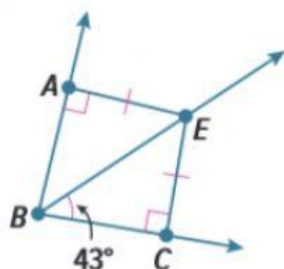
Practice

 **Go Online** You can complete your homework online.

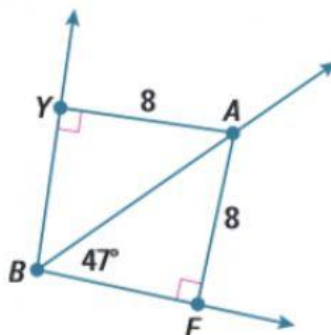
Examples 1 and 2

Find each measure.

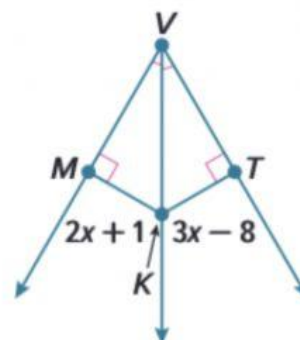
1. $m\angle ABE$



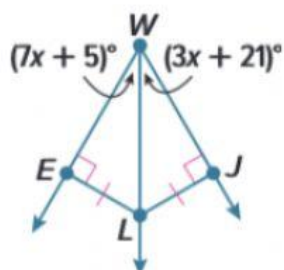
2. $m\angle YBA$



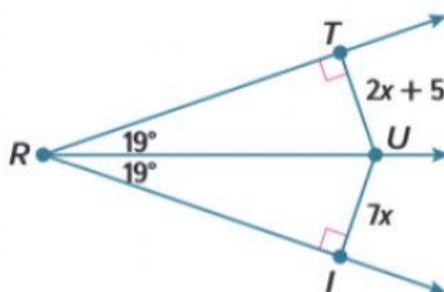
3. MK



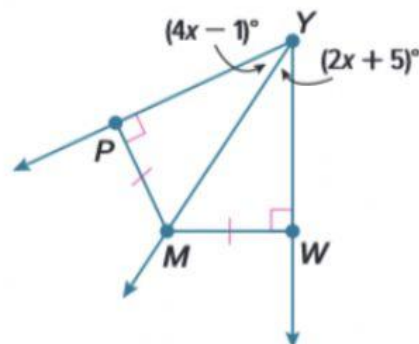
4. $m\angle EWL$



5. IU



6. $m\angle MYW$

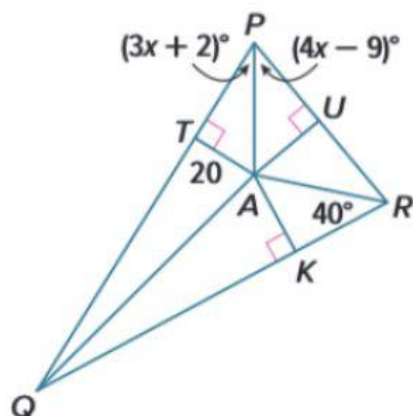


Example 3

A is the incenter of $\triangle PQR$. Find each measure.

7. $m\angle ARU$

8. AU



U is the incenter of $\triangle GHY$. Find each measure.

9. $m\angle UGM$

10. $m\angle PHU$

11. HU

