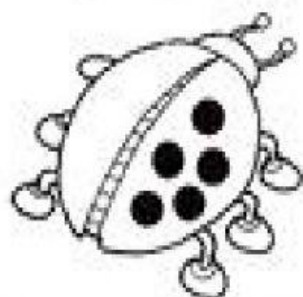
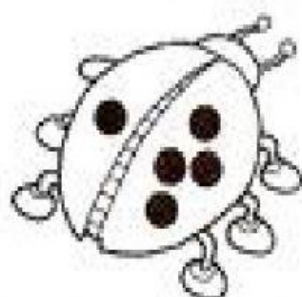


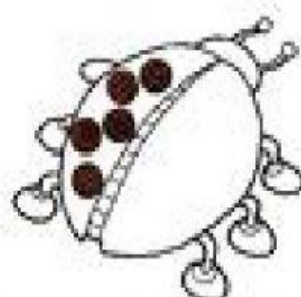
1) CONTE QUANTAS BOLINHAS HÁ EM CADA LADO DAS JOANINHAS, SOME-OS E FORME OS SUBCONJUNTOS DO 5. VEJA O MODELO.



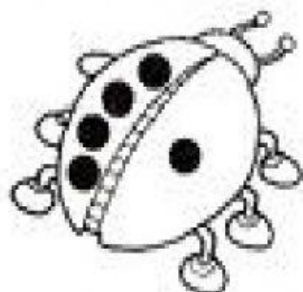
$$0 + 5 = 5$$



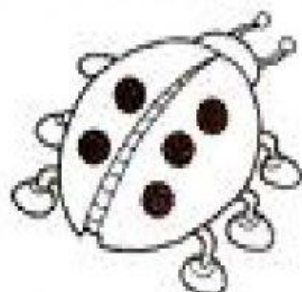
$$\dots + \dots = \dots$$



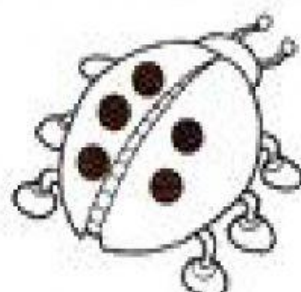
$$\dots + \dots = \dots$$



$$\dots + \dots = \dots$$



$$\dots + \dots = \dots$$



$$\dots + \dots = \dots$$

2) AGORA, RESOLVA AS ADIÇÕES.



$$0 + \dots = 5$$

$$\dots + 0 = 5$$

$$3 + \dots = 5$$

$$2 + \dots = 5$$

$$\dots + 1 = 5$$

$$\dots + 4 = 5$$