
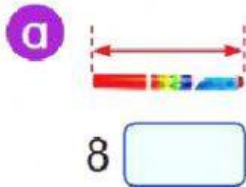


NAME : _____

DATE: _____

LET'S ANSWER

1 State the most suitable unit of length, cm or m.



2 Write the symbol for each unit of length.

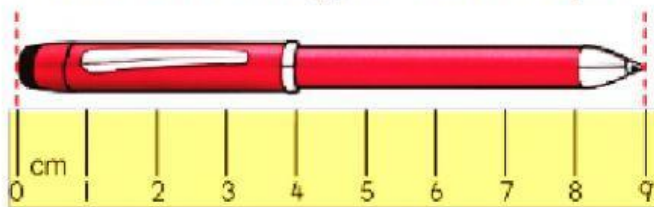
a 2 centimetres

b 57 centimetres

c 3 metres

d 40 metres

3. State the length of the pen.



4. Estimate the length of each object.

