

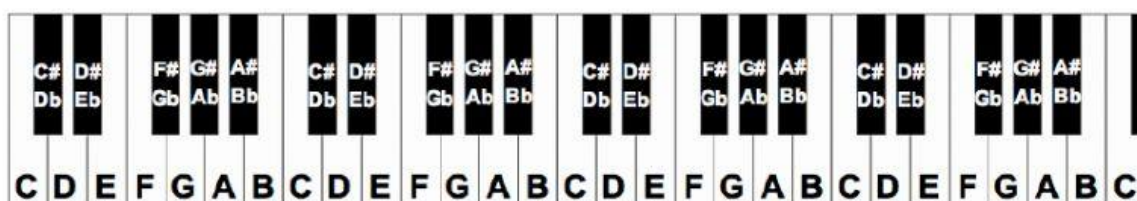
Figuring out Primary Chords of F and G Major

Review of C major primary chords.

Fill in the missing notes in these triads, using white notes only.

C _ G	F A _	G _ _	_ C E
-------	-------	-------	-------

## F MAJOR Primary Chords



Using this keyboard image, try to figure out the primary chords of F Major.

F Major uses these notes in its scale



1. Identify 1<sup>st</sup>, 4<sup>th</sup>, 5<sup>th</sup> and 6<sup>th</sup> note of the scale.

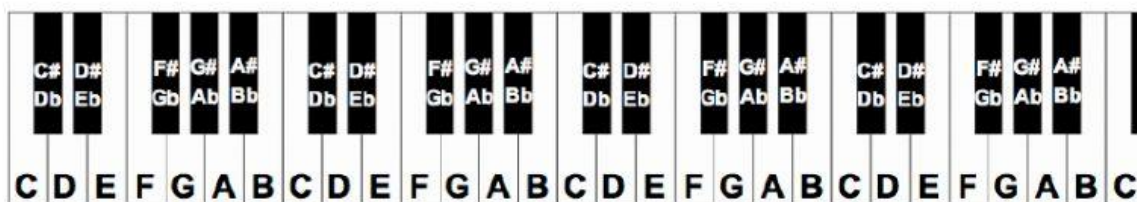
Write your answers in the boxes below

_	_	_	_
I	VI	V	vi

2. Using the answers in the boxes above, write in the triads to make chords of I, IV, V and vi


_ _ _	_ _ _	_ _ _	_ _ _
I	IV	V	vi

## G MAJOR Primary Chords



Using this keyboard image, try to figure out the primary chords of G Major.

G Major uses these notes in its scale



1. Identify 1<sup>st</sup>, 4<sup>th</sup>, 5<sup>th</sup> and 6<sup>th</sup> note of the scale.

Write your answers in the boxes below

—	—	—	—
I	VI	V	vi

2. Using the answers in the boxes above, write in the triads to make chords of I, IV, V and vi

— — —	— — —	— — —	— — —
I	IV	V	vi