




**Math Final Exam**  
**First Term**  
**Kinder \_\_\_\_\_**

Name: \_\_\_\_\_ date: \_\_\_\_\_


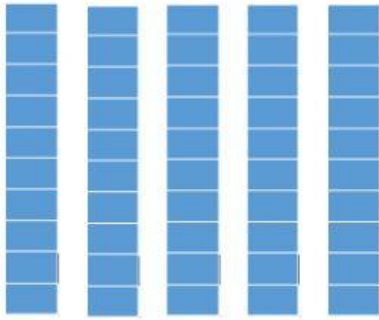
1. Ana Maria has 23 pearls, count and circle them.



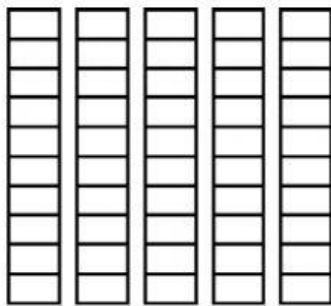
2. Write How many tens and ones we have in A and B.

A.	B.
<div>ten    ones</div>	<div>tens    ones</div>

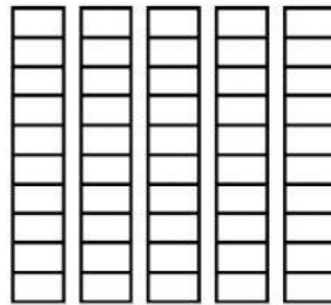
3. Color tens and ones to show each number.



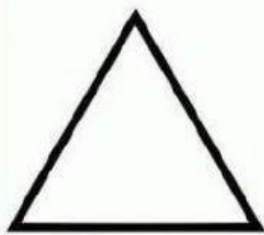
**22**



**14**



4. Describe the shape by selecting the correct option.



4 vertices	Yes	No
3 sides	Yes	No



4 sides	Yes	No
Curve line	Yes	No

5. How I can make 20? Write two ways.

<input type="text"/>	+	<input type="text"/>	= 20	<b>2</b>	<b>10</b>	<b>4</b>
<input type="text"/>	+	<input type="text"/>	= 20	<b>10</b>	<b>16</b>	<b>1</b>