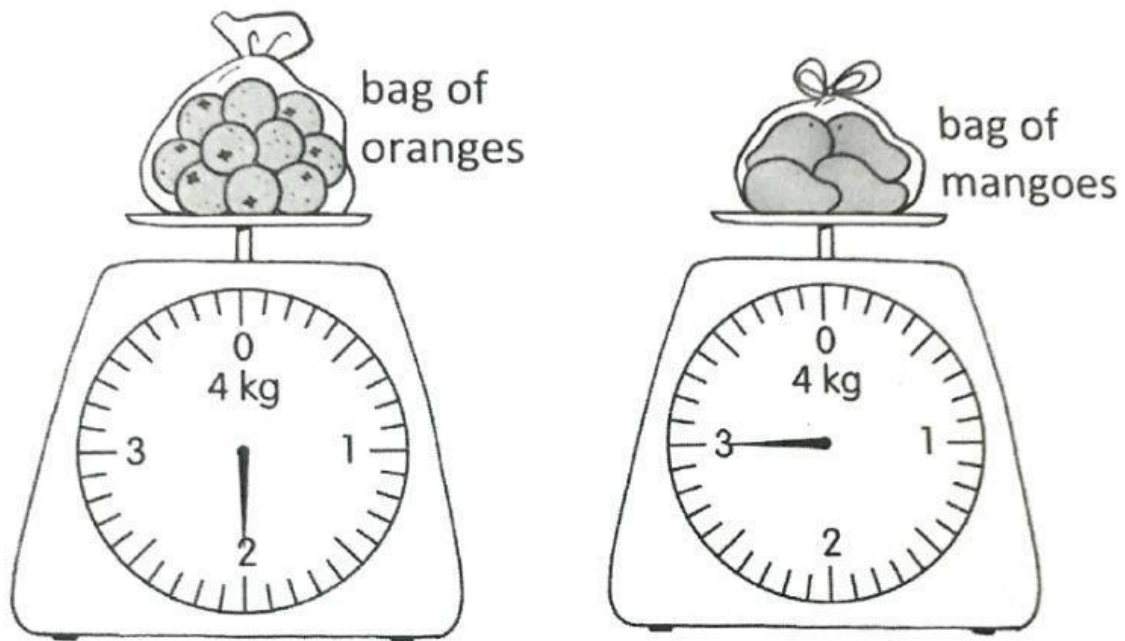


Practice 5 Comparing Masses in Kilograms

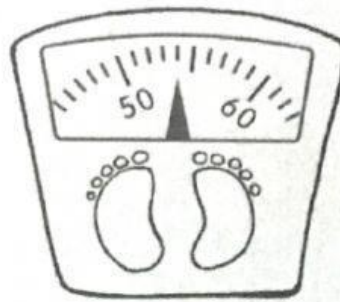
1.



- (a) The mass of the bag of oranges is 2 kg.
- (b) The mass of the bag of mangoes is 3 kg.
- (c) Which bag is lighter? bag of oranges
- (d) Which bag is heavier? bag of mangoes
- How much heavier? 1 kg

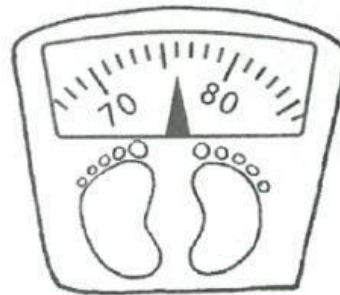
3. Fill in the blanks.

(a)



Nurul has a mass of 54 kg.

(b)



Hasri has a mass of 76 kg.

(c) Who is heavier, Nurul or Hasri? Hasri

How much heavier? 22 kg

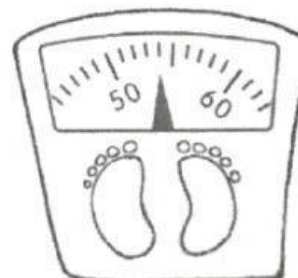


Hasri

?

?

?



Nurul