

**Kendriya Vidyalaya Janjgir**

**Worksheet, Class - 5, Subject - Math**

**Topic - Shapes and Angles**

Q.1. Place the following angles in its correct type:-

90°

180°

135°

89°

Straight Angle

Acute Angle

Obtuse Angle

Right Angle

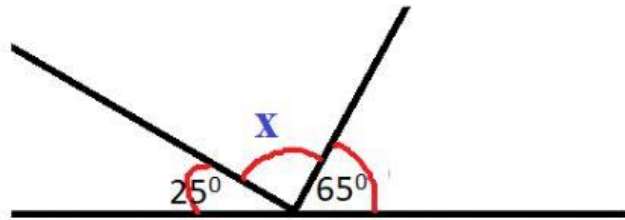
Q.2. What is the measurement of "x" in the following picture:-

(a) 65°

(b) 90°

(c) 10°

(d) 180°



Q.3. An angles whose measurement is between ..... called Acute angle.

(a) 0° to 90°

(b) 90° to 135°

(c) 150° to 180°

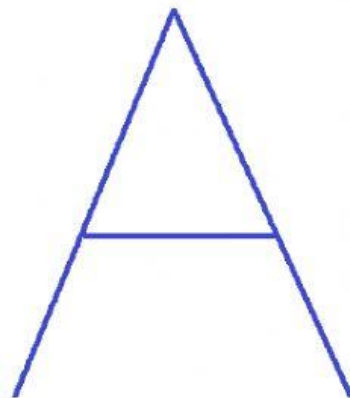
Q.4. How many right angles are there in the following letter:-

(a) 2

(b) 5

(c) 3

(d) 0



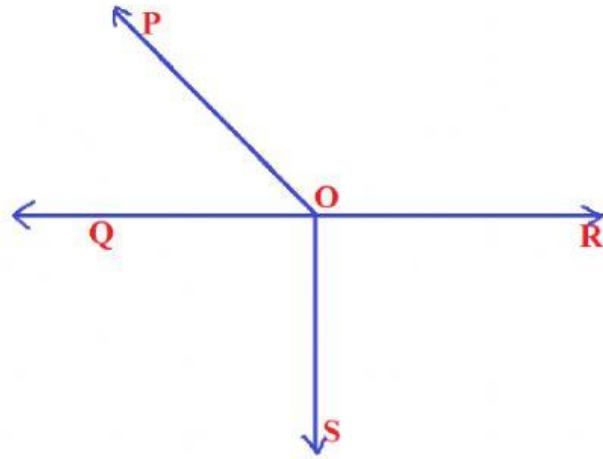
Look the following shape and answer the following:-

1. Which of the following is a Obtuse angle:-

(a)  $\angle POQ$

(b)  $\angle POR$

(c)  $\angle SOQ$



2. Vertex in the shape is:-

(a) Q

(b) R

(c) O

3. Which angle is right angle:-

(a)  $\angle ROS$

(b)  $\angle QOS$

(c) both (a) and (b)