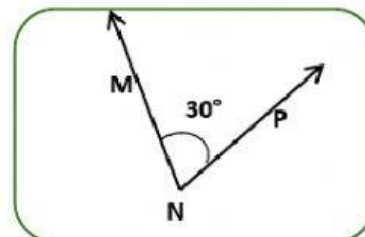
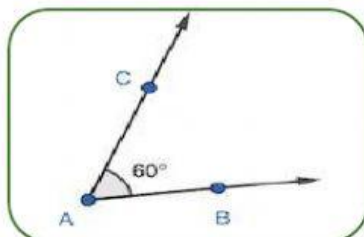
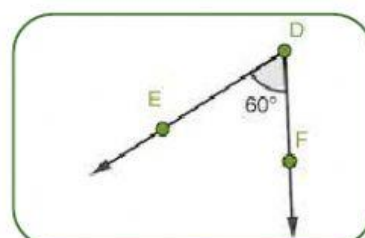
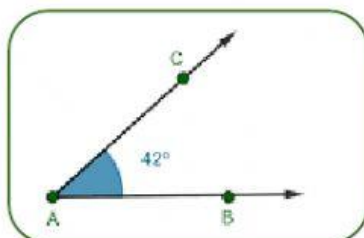
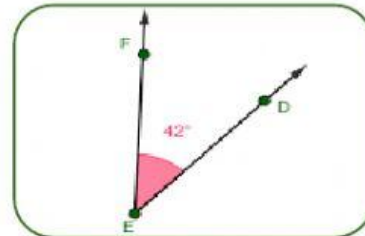
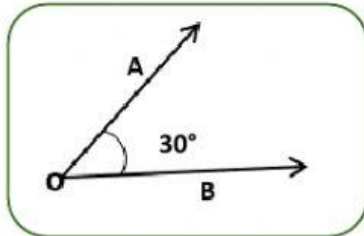


ATIVIDADE -5:

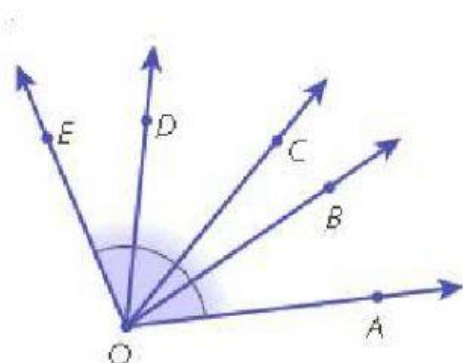
Questão 1

Ligue os ângulos que são **congruentes**:



Questão 2

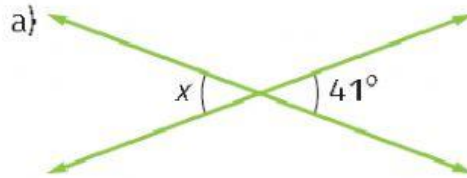
Observe a figura abaixo e marque os pares de ângulos adjacentes.



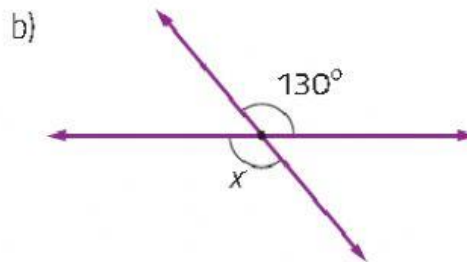
- a) () \widehat{AOB} e \widehat{BOC}
- b) () \widehat{BOE} e \widehat{COD}
- c) () \widehat{COD} e \widehat{DOE}
- d) () \widehat{AOD} e \widehat{DOE}
- e) () \widehat{AOC} e \widehat{COD}
- f) () \widehat{AOC} e \widehat{COE}

Questão 3

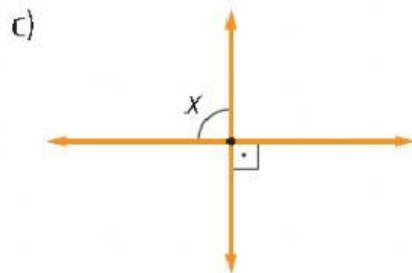
Determine o **valor de x**, em graus, em cada figura abaixo:



$x = \quad ^\circ$



$x = \quad ^\circ$



$x = \quad ^\circ$