




GUIA DE MATEMÁTICA			
DOCENTES	Verónica Oróstica – Raquel Godoy – M. Elena Hermosilla.	UNIDAD	N° 2
NOMBRE:		NIVEL	1° A-B -C
OBJETIVOS APRENDIZAJE	DE OA8: Determinar las unidades y decenas en números del 0 al 100, agrupando de a 10, de manera concreta, pictórica y simbólica.	FECHA	30 AGOSTO 2021

Las Decenas

Una **unidad** es una sola cosa → 

Una **decena** es un conjunto de 10 unidades →  → 

10u → 1d

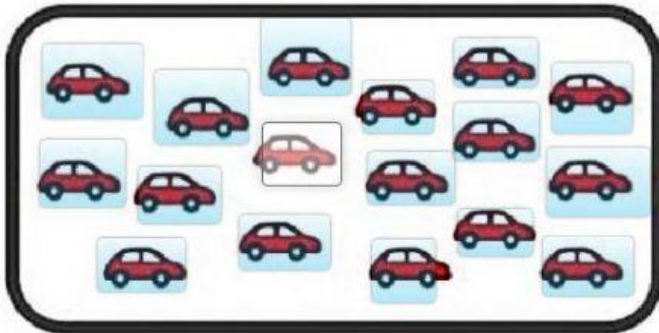


Decenas Unidades
2 1

DECENAS COMPLETAS

10  diez decena	20  veinte	30  treinta	40  cuarenta	50  cincuenta
60  sesenta	70  setenta	80  ochenta	90  noventa	


1.- Rodea la decena y escribe cuantos hay.



Decena	Unidad

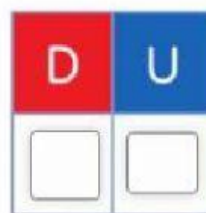
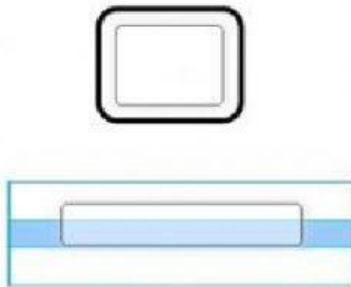
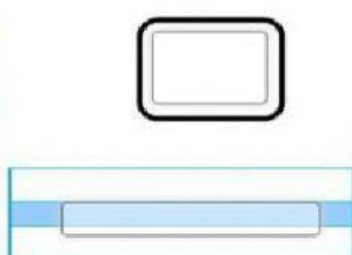
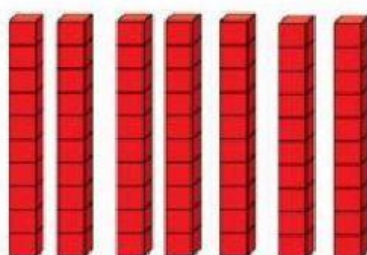

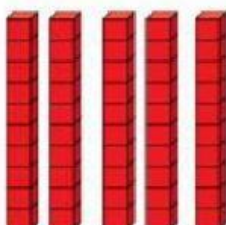


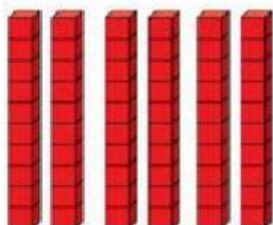


Decena	Unidad

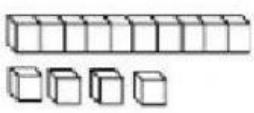
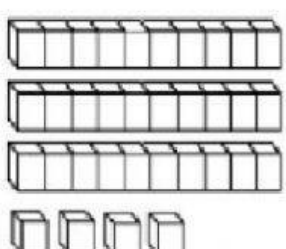
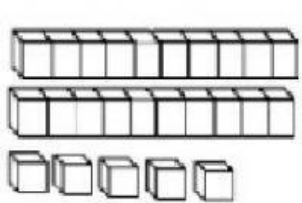
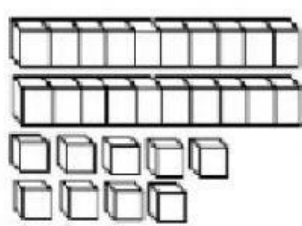


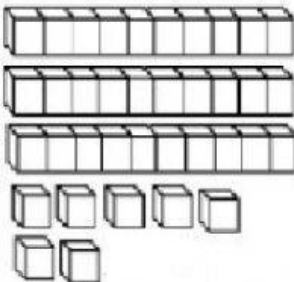
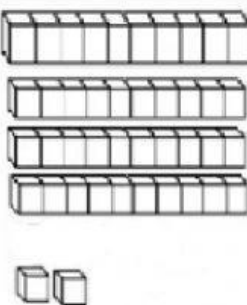
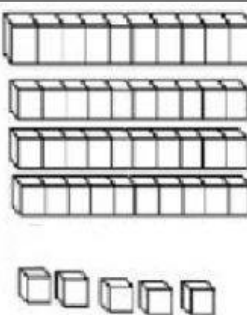
Decena	Unidad

2.- Observa la cantidad de decenas y escribe en números, en palabras y en el tablero de valor posicional.



3.- Escribe los números, guíate por el ejemplo.

	<table border="1" style="border-collapse: collapse; width: 100px; height: 100px;"> <tr> <td style="text-align: center; color: red; font-size: 0.8em;">D</td> <td style="text-align: center; color: blue; font-size: 0.8em;">U</td> </tr> <tr> <td style="text-align: center; font-size: 1.5em;">1</td> <td style="text-align: center; font-size: 1.5em;">4</td> </tr> </table>	D	U	1	4	$\overset{\text{D}}{\boxed{10}} + \overset{\text{U}}{\boxed{4}} = \boxed{14}$
D	U					
1	4					
	<table border="1" style="border-collapse: collapse; width: 100px; height: 100px;"> <tr> <td style="text-align: center; color: red; font-size: 0.8em;">D</td> <td style="text-align: center; color: blue; font-size: 0.8em;">U</td> </tr> <tr> <td style="height: 60px;"></td> <td style="height: 60px;"></td> </tr> </table>	D	U			$\boxed{} + \boxed{} = \boxed{}$
D	U					
	<table border="1" style="border-collapse: collapse; width: 100px; height: 100px;"> <tr> <td style="text-align: center; color: red; font-size: 0.8em;">D</td> <td style="text-align: center; color: blue; font-size: 0.8em;">U</td> </tr> <tr> <td style="height: 60px;"></td> <td style="height: 60px;"></td> </tr> </table>	D	U			$\boxed{} + \boxed{} = \boxed{}$
D	U					
	<table border="1" style="border-collapse: collapse; width: 100px; height: 100px;"> <tr> <td style="text-align: center; color: red; font-size: 0.8em;">D</td> <td style="text-align: center; color: blue; font-size: 0.8em;">U</td> </tr> <tr> <td style="height: 60px;"></td> <td style="height: 60px;"></td> </tr> </table>	D	U			$\boxed{} + \boxed{} = \boxed{}$
D	U					

	<table border="1" style="width: 100%; height: 100px; border-collapse: collapse;"> <tr> <td style="width: 50%; text-align: center; color: red;">D</td> <td style="width: 50%; text-align: center; color: blue;">U</td> </tr> <tr> <td style="height: 60px;"></td> <td style="height: 60px;"></td> </tr> </table>	D	U			$\square + \square = \square$
D	U					
	<table border="1" style="width: 100%; height: 100px; border-collapse: collapse;"> <tr> <td style="width: 50%; text-align: center; color: red;">D</td> <td style="width: 50%; text-align: center; color: blue;">U</td> </tr> <tr> <td style="height: 60px;"></td> <td style="height: 60px;"></td> </tr> </table>	D	U			$\square + \square = \square$
D	U					
	<table border="1" style="width: 100%; height: 100px; border-collapse: collapse;"> <tr> <td style="width: 50%; text-align: center; color: red;">D</td> <td style="width: 50%; text-align: center; color: blue;">U</td> </tr> <tr> <td style="height: 60px;"></td> <td style="height: 60px;"></td> </tr> </table>	D	U			$\square + \square = \square$
D	U					

