










POSITION AND LOCATION ON A GRID

	A	B	C	D	E	
5						5
4						4
3						3
2						2
1						1
	A	B	C	D	E	

Study the grid shown and then answer the following questions.

1. The is at D3.

2. The position of is at A2.

3. The is at C5.

4. The location of the rubbish bin on the grid is at

5. The pencil is located at

6. What is the location of the key on the grid? It is located at

7. Put these on the grid:

a) Tissue roll is at A5.

b) Trumpet is at C1

c) Pen is at E2.

d) Bucket is at A4.

