

1. How many shapes would be used for Figure 6?

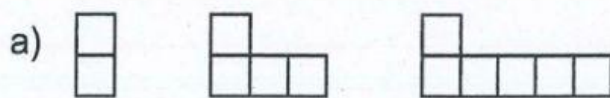


Figure 1

Figure 2

Figure 3

There are shapes used for Figure 6

Figure	Shapes

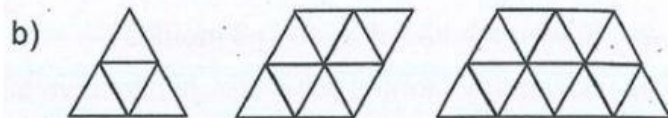


Figure 1

Figure 2

Figure 3

There are shapes used for Figure 6

Figure	Shapes

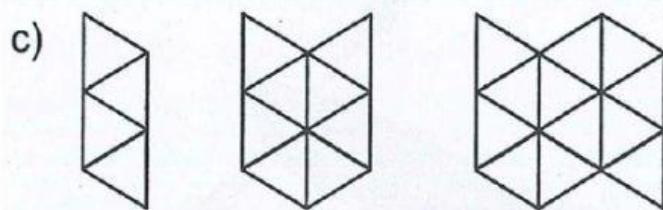


Figure 1

Figure 2

Figure 3

There are shapes used for Figure 6

Figure	Shapes


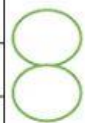


Figure 1

Figure 2

Figure 3

There are shapes used for Figure 6

Figure	Shapes



2. Priya makes a sequence of Ls with nickels.

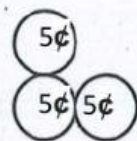


Figure 1

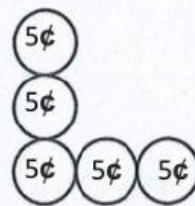


Figure 2

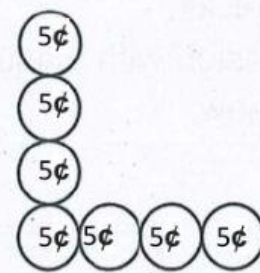


Figure 3

a) How many nickels will be in Figure 5?

Figure	Nickels



There are Nickels in Figure 5

b) What is the value of the coins in Figure 5?