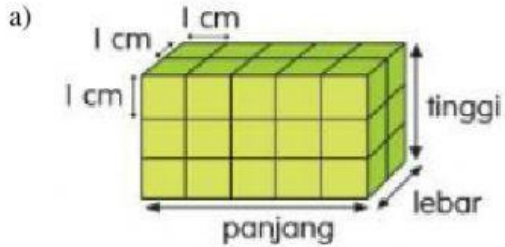
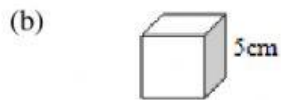


D4 Isi padu

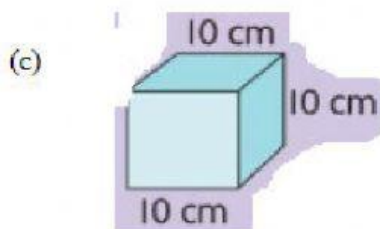
1. Hitung isi padu, dalam cm^3 , bentuk berikut.



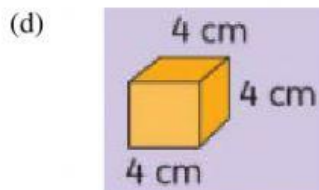
cm^3



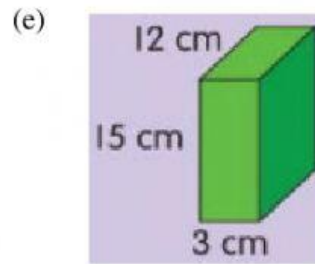
cm^3



cm^3




cm^3



cm^3

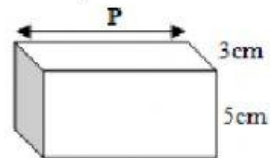
2. Rajah menunjukkan bentuk 3 dimensi.



Hitung isi padu, dalam cm^3 , kuboid berikut.

cm^3

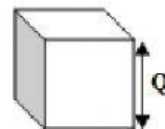
4. Rajah menunjukkan sebuah kuboid



Diberi isi padu rajah di atas ialah 135 cm^3 , kira nilai **P**.

cm

5. Rajah menunjukkan sebuah kubus.



Diberi isi padu rajah di atas ialah 216 cm^3 , kira nilai **Q**.

cm