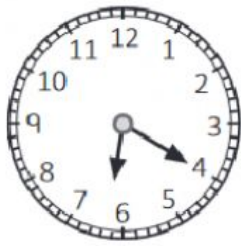



What is the time?

Example



6.20

20 minutes past 6




4.55

5 minutes to 5

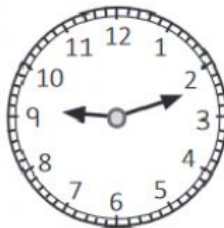
You can tell the time in two ways.



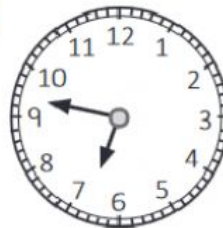
(a)



(b)



(c)



Fill in the blanks.

(a) 10 minutes past 6 is _____.

(b) 20 minutes to 10 is _____.

(c) 18 minutes past 2 is _____.

(d) 15 minutes to 1 is _____.

(e) 8.25 is _____ minutes past _____.

(f) 6.50 is _____ minutes to _____.