



## MATEMATICA

1- ESCREVA O NOME DE CADA FIGURA ABAIXO:

(Clicar no quadro e digitar).



2- RESOLVA OS PROBLEMINHAS BAIXO: (Clicar no quadro e digitar).

A) LUCAS TINHA TRÊS BOLAS E GANHOU MAIS DUAS. QUANTAS BOLAS ELE TEM AGORA?



$$\square + \square = \square$$

B) ALICE TINHA CINCO BONECAS E GANHOU MAIS DUAS. QUANTAS BONECAS ELA TEM AGORA?



$$\square + \square = \square$$

C) ARTHUR TEM QUATRO PIPAS E GANHOU MAIS QUATRO. QUANTAS PIPAS ELE TEM AGORA?




$$\square + \square = \square$$



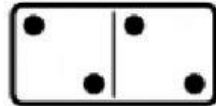
NOME:

DATA:


### SOMANDO COM AS PEÇAS DO DOMINÓ




$$\boxed{4} + \boxed{6} = \boxed{10}$$




$$\boxed{\phantom{0}} + \boxed{\phantom{0}} = \boxed{\phantom{0}}$$




$$\boxed{\phantom{0}} + \boxed{\phantom{0}} = \boxed{\phantom{0}}$$




$$\boxed{\phantom{0}} + \boxed{\phantom{0}} = \boxed{\phantom{0}}$$



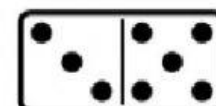
$$\boxed{\phantom{0}} + \boxed{\phantom{0}} = \boxed{\phantom{0}}$$



$$\boxed{\phantom{0}} + \boxed{\phantom{0}} = \boxed{\phantom{0}}$$



$$\boxed{\phantom{0}} + \boxed{\phantom{0}} = \boxed{\phantom{0}}$$



$$\boxed{\phantom{0}} + \boxed{\phantom{0}} = \boxed{\phantom{0}}$$

