



DIAGNOSTIC

1ST TRIMESTER



MATH

1ST. GRADE

Name: _____ . List number: _____ .

Date: _____ . Group: _____ .

1. Count how many objects are on each square and write the number in the box.



2. Write the words for each number.

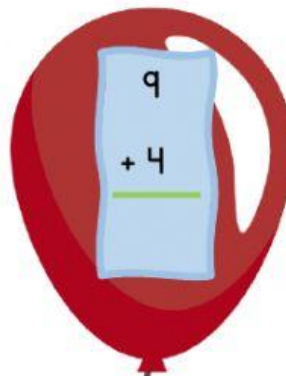
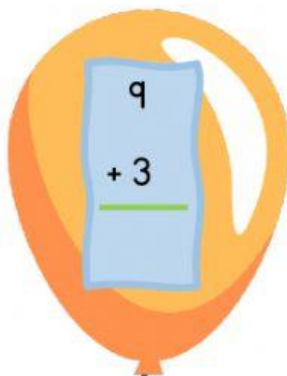


4 _____ 10 _____ 6 _____ 5 _____

3. Complete the series.

1		3		5
6				

4. Solve the additions inside the balloons.



5. Color the shapes according to the instructions.

Color all the square shapes **ORANGE**.

Color all the star shapes **PINK**.

Color all the heart shapes **RED**.

Color all the circle shapes **BLUE**.

Color all the triangle shapes **GREEN**.

