

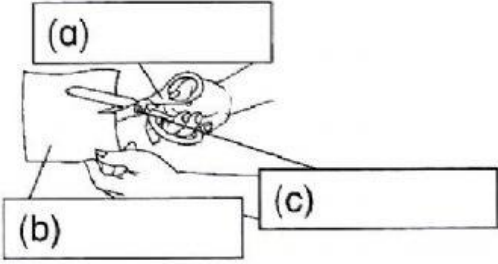
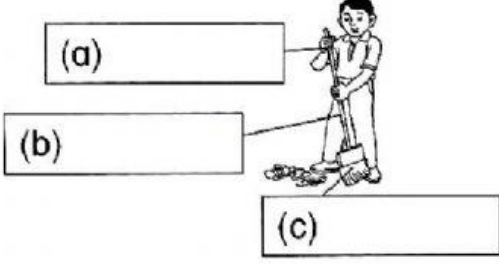
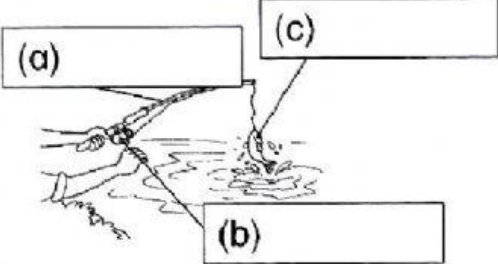
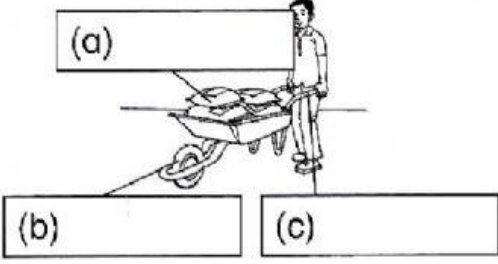
NAME : \_\_\_\_\_

CLASS : \_\_\_\_\_

**UNIT 10 : MACHINES**

**LEVER**

Determine The Position Of Load, Force And Fulcrum Of The Levers Below.

<p>1.</p>  <p>(a) _____</p> <p>(b) _____</p> <p>(c) _____</p>	<p>2.</p>  <p>(a) _____</p> <p>(b) _____</p> <p>(c) _____</p>
<p>3.</p>  <p>(a) _____</p> <p>(b) _____</p> <p>(c) _____</p>	<p>4.</p>  <p>(a) _____</p> <p>(b) _____</p> <p>(c) _____</p>