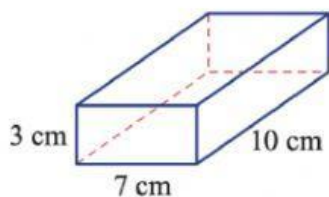
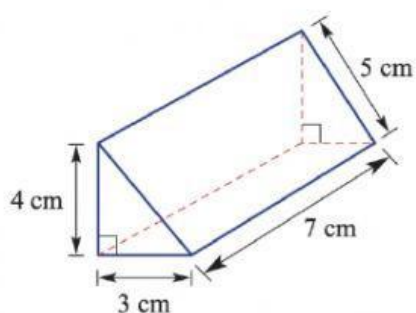


Surface Area of Prisms

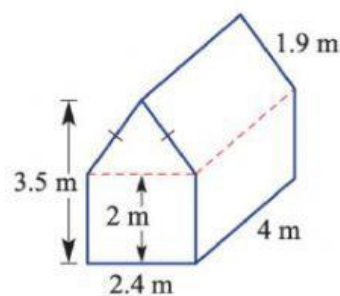
1. Find the surface area of each of the following rectangular prisms. Draw a net of each solid to help you.



2. Find the surface area of each of the following triangular prisms.



3. The four walls and roof of a barn are to be painted.
a. Find the surface area of the barn, not including the floor.



- b. If 1 litre of paint covers 10 m^2 , find how many litres are required to complete the job.