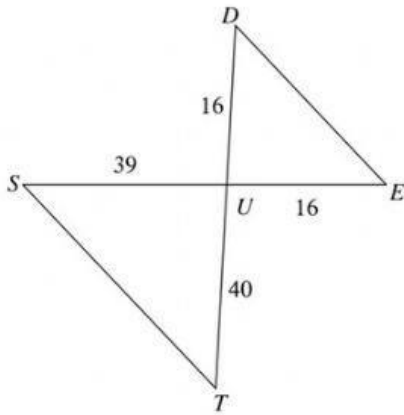


Similar Triangles

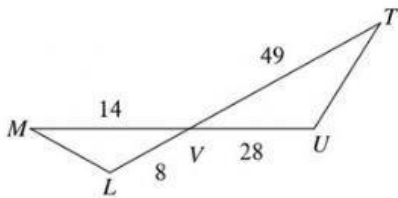
State if the triangles in each pair are similar. If so, state how you know they are similar and complete the similarity statement.

1)



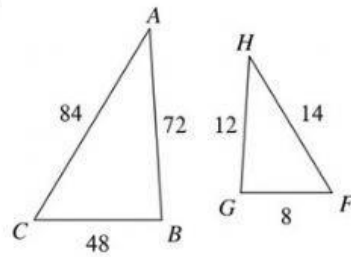
$\Delta UTS \sim \Delta$ _____

3)



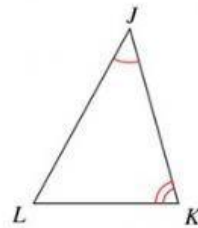
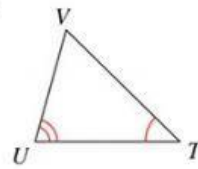
$\Delta VUT \sim \Delta$ _____

2)



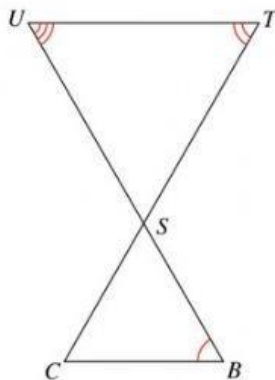
$\Delta CBA \sim \Delta$ _____

4)



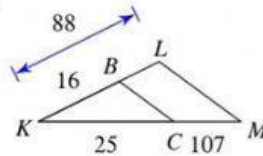
$\Delta JKL \sim \Delta$ _____

5)



$\Delta STU \sim \Delta$ _____

6)



$\Delta KLM \sim \Delta$ _____