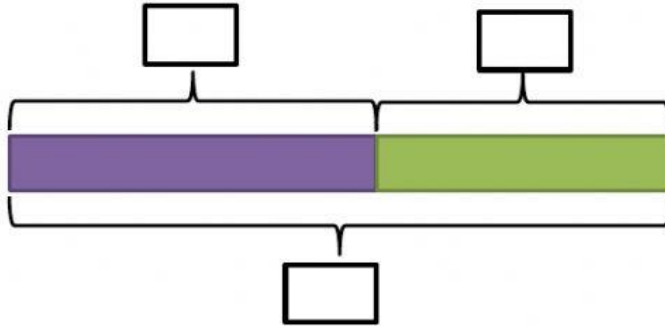


WORD PROBLEM

Fill in the box with numbers and suitable operator. Then solve the following word problem.

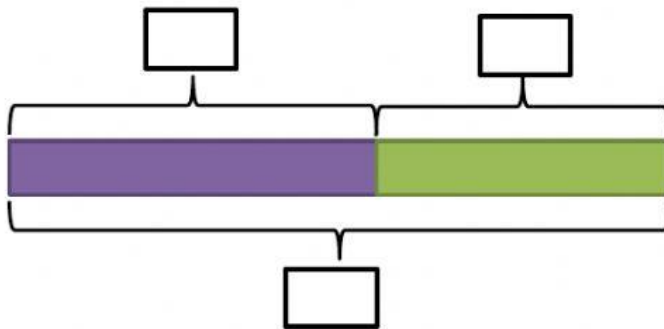
1. Yesterday Faris jogged 3650m. This morning he jogged 3588m. What was the total distance Faris jog on both days?



$$\square \square \square = \square$$

Faris jogged a total of meters on both days.

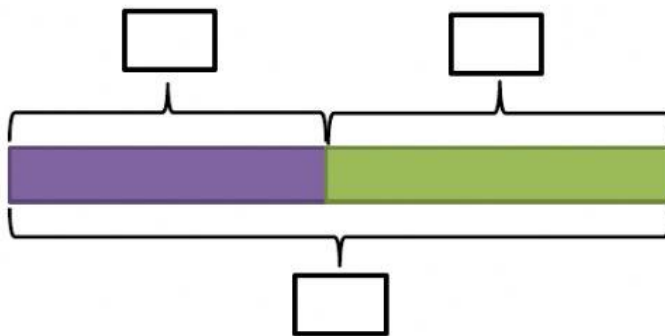
2. Balqis made 173 origami lucky stars and Zahraa made 125 origami lucky stars. How many origami lucky stars did they make altogether?



$$\square \square \square = \square$$

They made origami lucky stars altogether.

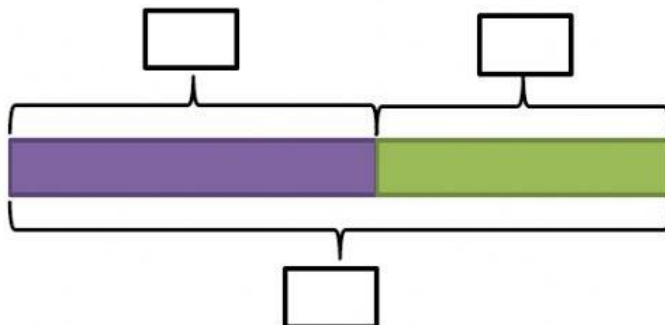
3. Zakwan had saved \$345 and Nifail had saved \$382. What was the total cash did Zakwan and Nifail have saved?



$$\square \square \square = \square$$

They saved a total of \square cash.

4. Iman baked 295 cupcakes on Monday. He then baked 235 cupcakes on Tuesday. How many cupcakes did he bake on altogether?



$$\square \square \square = \square$$

Iman baked \square cupcakes altogether.