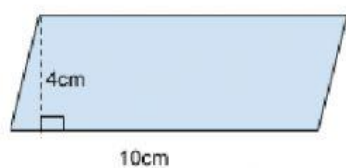


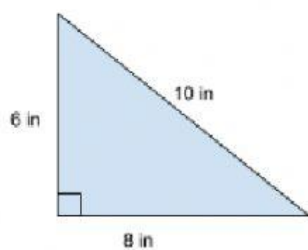
**Directions: Find the area of each figure. Be sure to fill in the information that is asked for. Type in the answer including the label for each box!**

1.



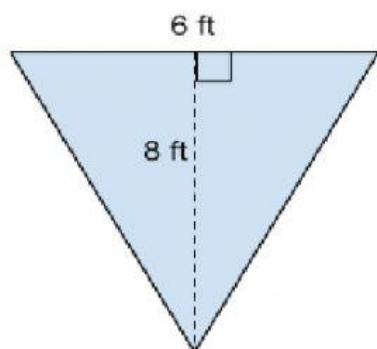
Base =  
Height =  
Area =

2.



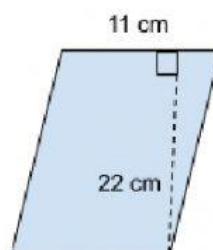
Base =  
Height =  
Area =

3.



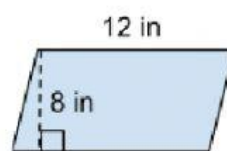
Base =  
Height =  
Area =

4.



Base =  
Height =  
Area =

5.



Base =  
Height =  
Area =