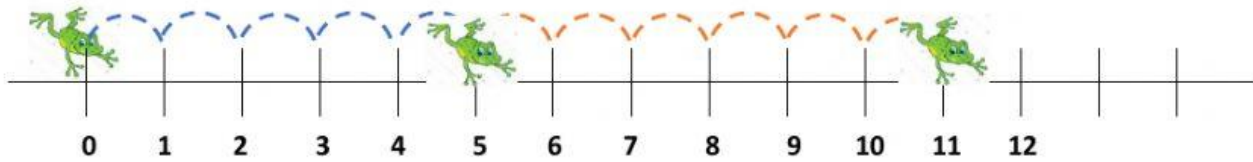


SUMA EN LA RECTA NUMÉRICA

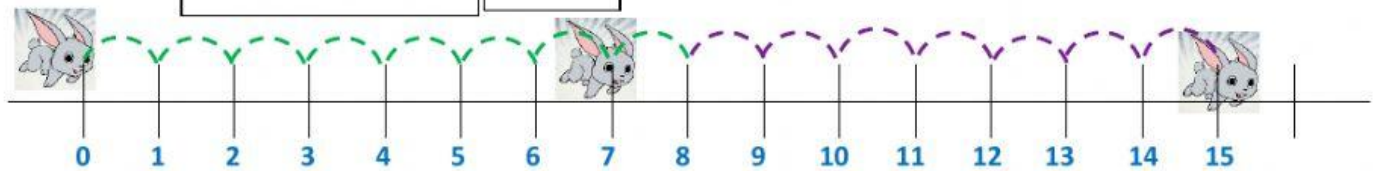
ANOTA LOS NÚMEROS QUE SALTAN LOS PERSONAJES EN LA RECTA NUMÉRICA Y EL RESULTADO TOTAL.



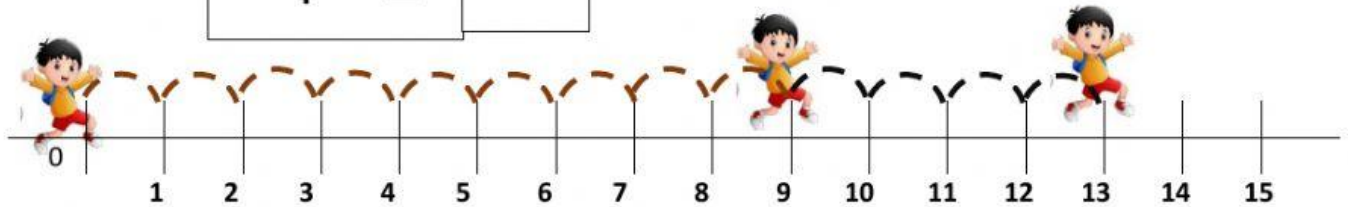
a) $\boxed{\quad} + \boxed{\quad} = \boxed{\quad}$



b) $\boxed{\quad} + \boxed{\quad} = \boxed{\quad}$



c) $\boxed{\quad} + \boxed{\quad} = \boxed{\quad}$



d) $\boxed{\quad} + \boxed{\quad} = \boxed{\quad}$

