


ATIVIDADES – PROFESSOR MOISÉS


FORMAS GEOMÉTRICAS – LÓGICA

1- QUANTOS PALITOS DE FÓSFORO EXISTEM NESSA FÍGURA?




RESPOSTA:

2 - QUANTOS QUADRADOS EXISTEM NESSA FÍGURA?



RESPOSTA:

3 – QUANTOS RETÂNGULOS EXISTEM NESSA FÍGURA?



RESPOSTA: