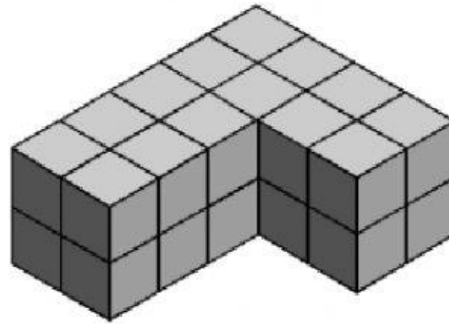


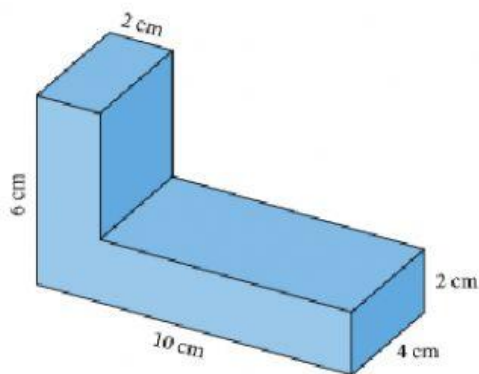
Volume of Composite Shapes

Q1: What is the volume of the given shape?



- ☐ A 32 cubic units
- ☐ B 12 cubic units
- ☐ C 28 cubic units
- ☐ D 4 cubic units
- ☐ E 24 cubic units

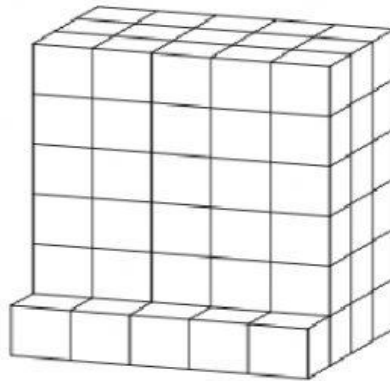
Q2: What is the volume of the given figure?



ANSWER :

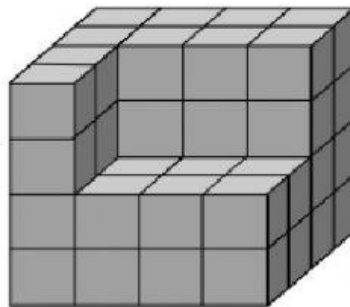
_____ cm³

Q3: What is the volume of the given shape?



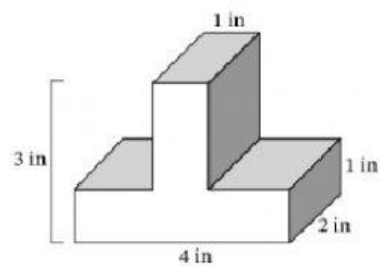
- ☐ A 5 cubic units
- ☐ B 25 cubic units
- ☐ C 90 cubic units
- ☐ D 95 cubic units
- ☐ E 30 cubic units

Q4: What is the volume of the given shape?



- ☐ A 64 cubic units
- ☐ B 12 cubic units
- ☐ C 20 cubic units
- ☐ D 52 cubic units
- ☐ E 76 cubic units

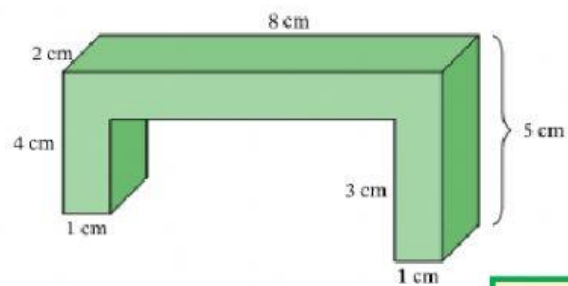
Q5: Find the volume of the composite figure.



ANSWER :

_____ in^3

Q6: Find the volume of the following figure.



ANSWER :

_____ cm^3