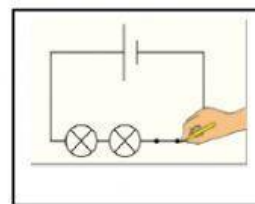
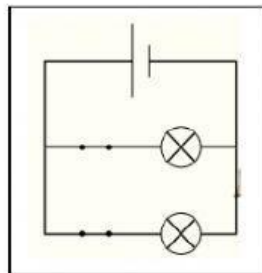

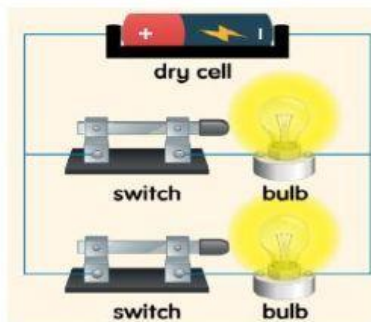



Electricity (Series circuit and Parallel circuit)

A. Write the name of circuit below and match the circuit to the correct sketch.

Tulis nama bagi litar di bawah dan padankan dengan lakaran yang betul.



B. Fill in the blank with the correct answer. You can refer your science textbook on page 118 and 119.

Isi tempat kosong dengan jawapan yang betul. Kamu boleh merujuk buku teks Sains pada muka surat 118 dan 119.

1. In a series circuit, each bulb is arranged in _____.
2. Series circuit has a _____ for the electric current to flow.
3. In parallel circuit, each bulb is arranged in _____ that are parallel to each other.
4. The electric current in parallel circuit can flow in _____.

single path

several branches

more than one path

one chain