



Addition

Adding sets and writing number sentences




Write the number sentence for the problem above:






Write the number sentence for the problem above:

$$\begin{array}{|c|} \hline \square \\ \hline \end{array} + \begin{array}{|c|} \hline \square \\ \hline \end{array} = \begin{array}{|c|} \hline \square \\ \hline \end{array}$$




+




=




Write the number sentence for the problem above:




+



=





Write the number sentence for the problem above:

$$\begin{array}{|c|} \hline \square \\ \hline \end{array} + \begin{array}{|c|} \hline \square \\ \hline \end{array} = \begin{array}{|c|} \hline \square \\ \hline \end{array}$$



Write the number sentence for the problem above:

$$\underline{\quad} + \underline{\quad} = \underline{\quad}$$