

Name _____

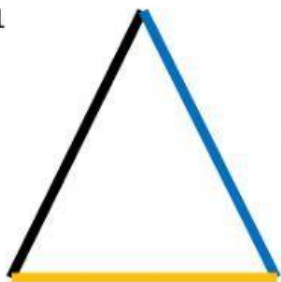
Date _____

Year Group _____

Classify the triangles as equilateral, isosceles, or scalene

Write the letter **E** for Equilateral Triangle, **I** for Isosceles Triangle, or **S** for Scalene Triangle

1



Answer _____

2



Answer _____

3



Answer _____

4




Answer _____

5



Answer _____

6



Answer _____

7



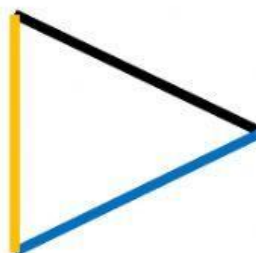
Answer _____

8



Answer _____

9



Answer _____