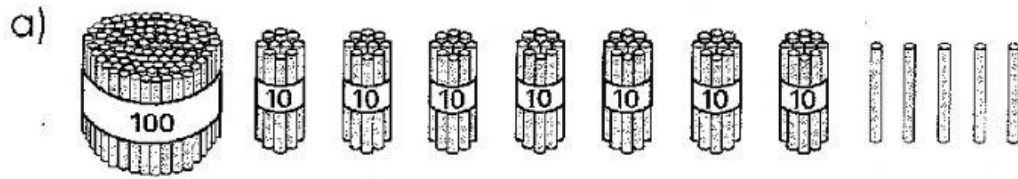
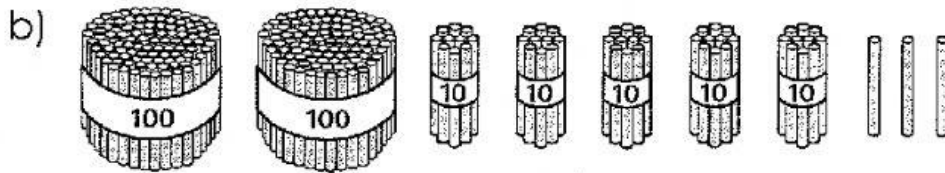


Exercise 4 Hundreds, Tens and Ones


1. Write the numbers.




$$100 + 70 + 5 = \underline{\hspace{2cm}}$$



$$200 + 50 + 3 = \underline{\hspace{2cm}}$$



$$200 + 40 = \underline{\hspace{2cm}}$$



$$400 + 7 = \underline{\hspace{2cm}}$$