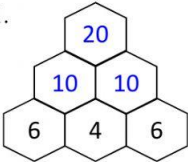
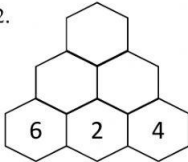
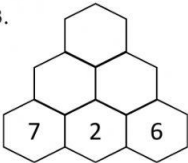
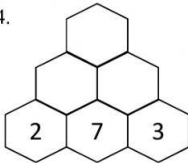
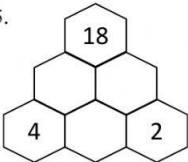
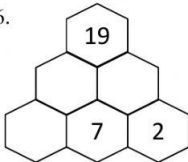


Addition and subtraction: Stack-up puzzle

60

- For each question, fill-in the missing numbers using the following rules.
- Each number is the sum of the two numbers below it.
 - The first has been completed for you

1. 	2. 
3. 	4. 
5. 	6. 

Addition and subtraction: Fin-the-phrase puzzle

61

- Find the phrase by entering a letter in each box based on the answers to the addition and subtraction operations.

What do you do every day?

1	2	3	4	5

6	7	8	9	10	11

1	$20 - 8 =$
2	$9 - 1 =$
3	$14 - 7 =$
4	$10 - 3 =$
5	$19 - 5 =$
6	$20 - 7 =$
7	$4 - 2 =$
8	$12 - 7 =$
9	$8 - 1 =$
10	$18 - 9 =$
11	$16 - 2 =$

8	L
12	S
13	W
5	K
14	P
9	U
7	E
2	A