







P1 Math  
Unit 1 Test





1. Count and write the numbers.

a.  

b.  

c.  

d.  

2. Match to another way to add the numbers.

$6 + 4 = 10$

$7 + 3 = 10$

$8 + 2 = 10$

$4 + 6 = 10$

$3 + 7 = 10$

$2 + 8 = 10$

3. Look at the 20 square to answer the questions.


1	2	3	4	5	6	7	8	9	10
11	12	13	14	15	16	17	18	19	20

- a. 10 and 1 makes \_\_\_\_\_.
- b. 10 and 5 makes \_\_\_\_\_.
- c. 10 and \_\_\_\_\_ makes 14.
- d. 10 and \_\_\_\_\_ makes 18.
- e. \_\_\_\_\_ and 7 makes 17.

4. How many are there in each group?



$10 + \underline{\quad} = \underline{\quad}.$



$10 + \underline{\quad} = \underline{\quad}.$

5. Which one is shorter?

A.



B.



6. Which one is longer?

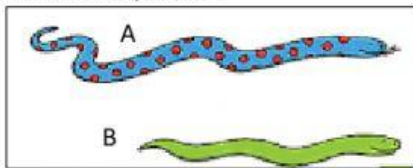
A.



B.



7. Look at the picture.



Snake A is \_\_\_\_\_ than snake B.

Snake B is \_\_\_\_\_ than snake A.